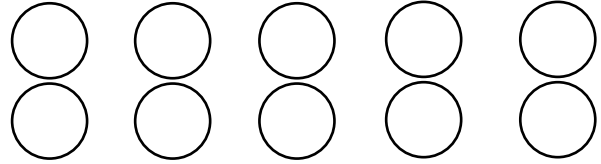


## Addition sentences

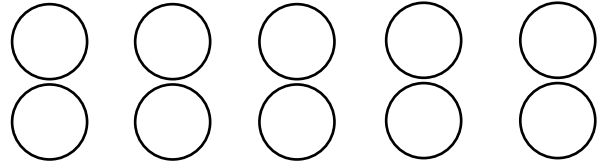
### Grade 1 Addition Worksheet

Find the missing number. Color in circles to help.

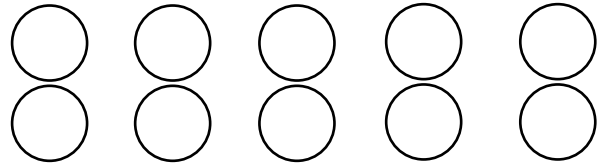
$5 + \underline{\quad} = 9$



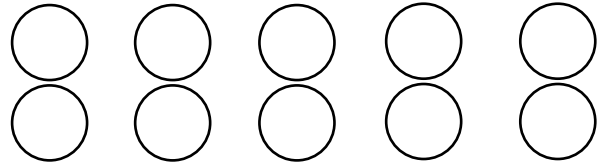
$3 + \underline{\quad} = 5$



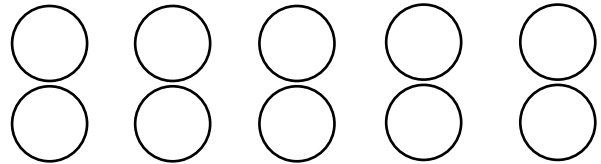
$2 + \underline{\quad} = 3$



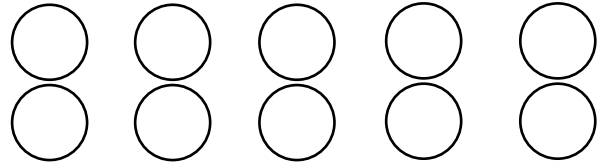
$1 + \underline{\quad} = 8$



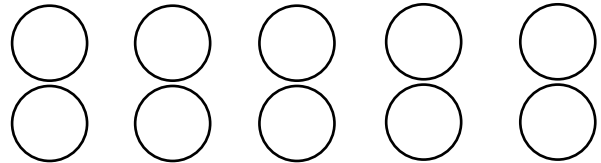
$4 + \underline{\quad} = 5$



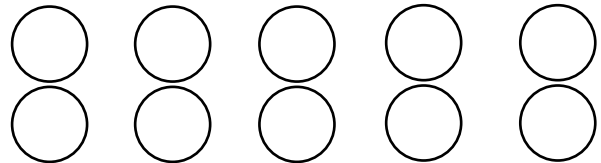
$4 + \underline{\quad} = 7$



$7 + \underline{\quad} = 9$

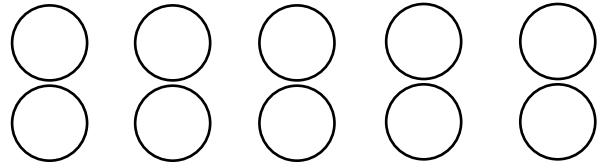


$3 + \underline{\quad} = 6$

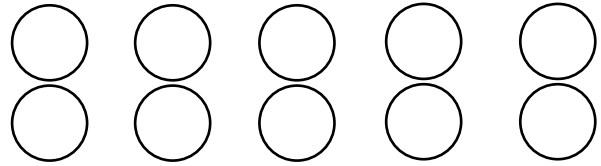


## Answers

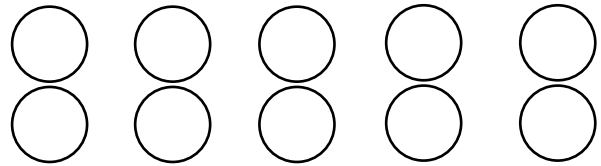
$5 + 4 = 9$



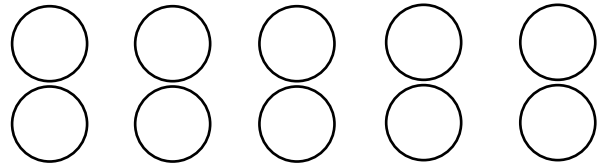
$3 + 2 = 5$



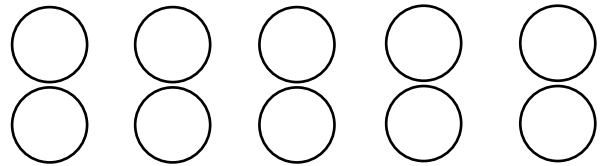
$2 + 1 = 3$



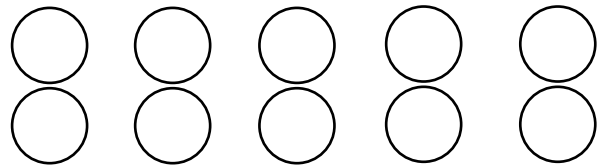
$1 + 7 = 8$



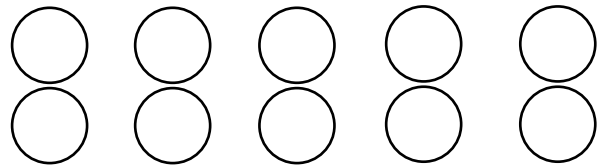
$4 + 1 = 5$



$4 + 3 = 7$



$7 + 2 = 9$



$3 + 3 = 6$

