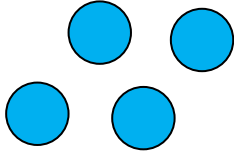


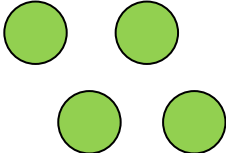
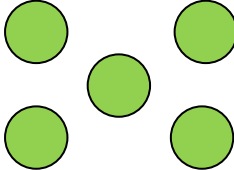
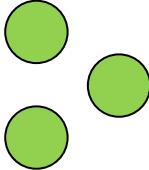


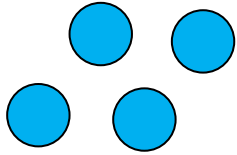
Adding with objects

Grade 1 Addition Worksheet

Count / draw circles, read / write numbers and find the sums.

	+		_____	+	_____	=	_____
	+		_____	+	_____	=	_____
_____	+	_____	$5 + 1 = \underline{\quad}$				
	+		_____	+	_____	=	_____
_____	+	_____	$1 + 5 = \underline{\quad}$				
_____	+	_____	$2 + 7 = \underline{\quad}$				

Answers



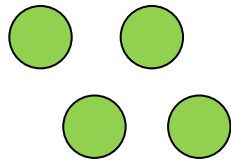
+



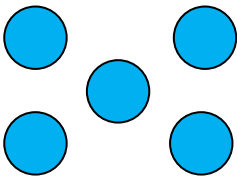
$$4 + 1 = 5$$



+



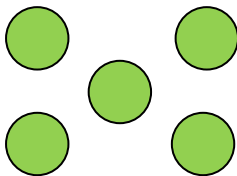
$$1 + 4 = 5$$



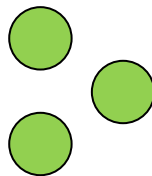
+



$$5 + 1 = 6$$



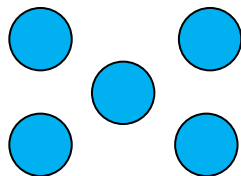
+



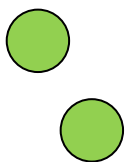
$$5 + 3 = 8$$



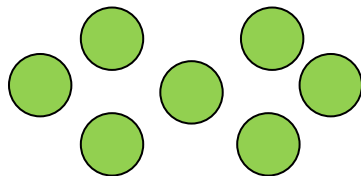
+



$$1 + 5 = 6$$



+



$$2 + 7 = 9$$