

# Thanksgiving addition

Thanksgiving Worksheet

Count the objects and write the numbers.

Then solve the equations.

$\underline{\quad\quad} + \underline{\quad\quad} = \square$

$\underline{\quad\quad} + \underline{\quad\quad} = \square$

$\underline{\quad\quad} + \underline{\quad\quad} = \square$



$\underline{\quad\quad} + \underline{\quad\quad} = \square$



## Thanksgiving addition (Answers)



Thanksgiving Worksheet



Count the objects and write the numbers.

Then solve the equations.

$$\underline{2} + \underline{3} = \boxed{5}$$



$$\underline{3} + \underline{5} = \boxed{8}$$



$$\underline{4} + \underline{6} = \boxed{10}$$



$$\underline{5} + \underline{4} = \boxed{9}$$