






## Weather forecasting

### Grade 2 Science Worksheet

Read the graph and answer the questions.

Monday	Tuesday	Wednesday	Thursday	Friday
				
93°   72°	92°   73°	88°   75°	93°   73°	88°   70°

What will the weather be like on Monday? \_\_\_\_\_






On which day might there be thunderstorms? \_\_\_\_\_

What would you wear on Tuesday? \_\_\_\_\_

What is the coolest it will get this week? \_\_\_\_\_

What season would this be? \_\_\_\_\_

## Answers

Monday	Tuesday	Wednesday	Thursday	Friday
				
93°   72°	92°   73°	88°   75°	93°   73°	88°   70°

What will the weather be like on Monday? sunny

On which day might there be thunderstorms? Wednesday

What would you wear on Tuesday? light sundress or shirt

What is the coolest it will get this week? 70°

What season would this be? summer