

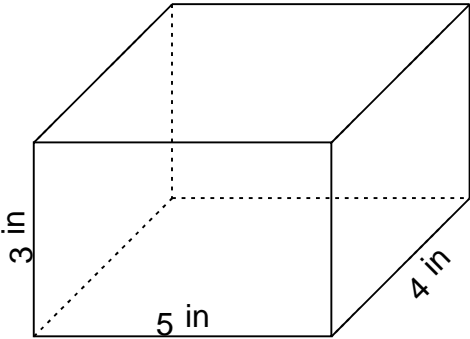
## Volume & surface area of 3D shapes

---

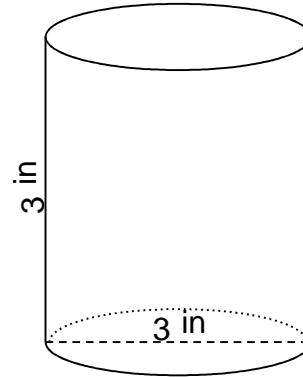
### Grade 6 Geometry Worksheet

Find the volume and surface area.

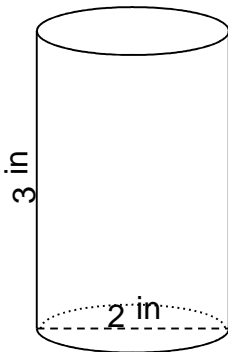
1.



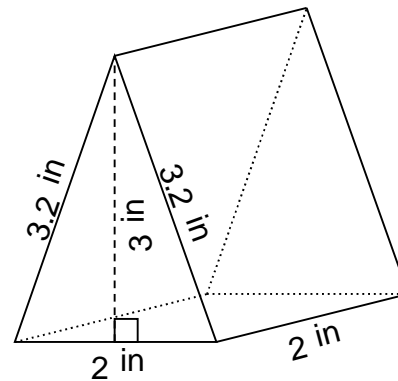
2.



3.



4.

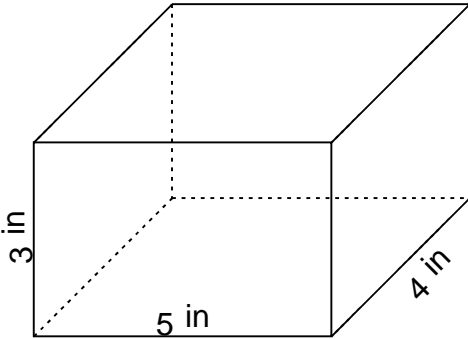


# Volume & surface area of 3D shapes

## Grade 6 Geometry Worksheet

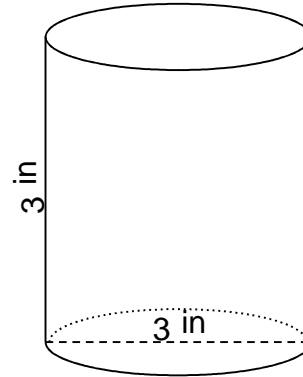
Find the volume and surface area.

1.



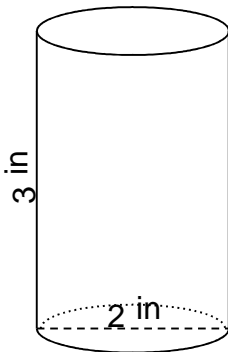
$$V = 60 \text{ in}^3 \quad SA = 94 \text{ in}^2$$

2.



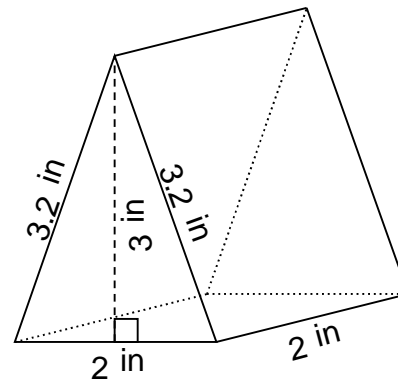
$$V = 21.21 \text{ in}^3 \quad SA = 42 \text{ in}^2$$

3.



$$V = 9.42 \text{ in}^3 \quad SA = 25 \text{ in}^2$$

4.



$$V = 6 \text{ in}^3 \quad SA = 22.8 \text{ in}^2$$