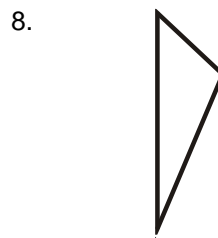
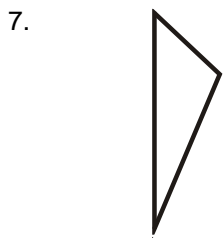
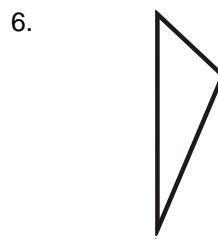
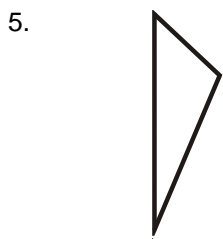
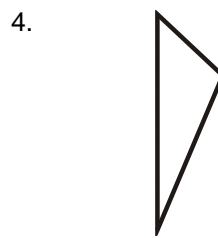

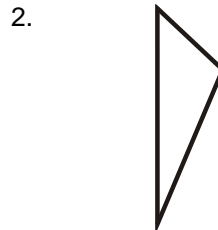
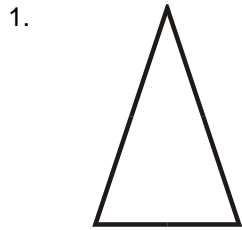


Types of Triangles

Grade 6 Geometry Worksheet

Identify if the triangle is scalene, isosceles or equilateral.

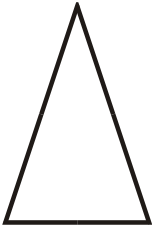


Types of Triangles

Grade 6 Geometry Worksheet

Identify if the triangle is scalene, isosceles or equilateral.

1.



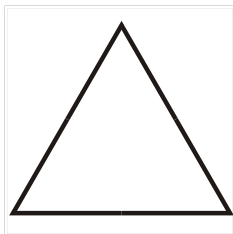
Isosceles Triangle

2.



Scalene Triangle

3.



Equilateral Triangle

4.



Scalene Triangle

5.



Scalene Triangle

6.



Scalene Triangle

7.



Scalene Triangle

8.



Scalene Triangle
