

Types of Quadrilaterals

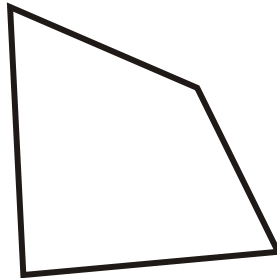
Grade 6 Geometry Worksheet

Identify the type of quadrilateral.


1.



2.



3.



4.



5.



6.



7.



8.



9.



Types of Quadrilaterals

Grade 6 Geometry Worksheet

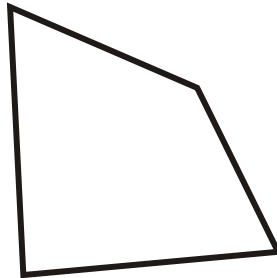
Identify the type of quadrilateral.

1.




Rectangle

2.



Irregular Quadrilateral

3.



Square

4.



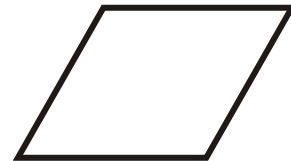
Trapezoid

5.



Parallelogram

6.



Rhombus

7.




Rectangle

8.



Rectangle

9.



Parallelogram