


# Types of Quadrilaterals

---

## Grade 6 Geometry Worksheet

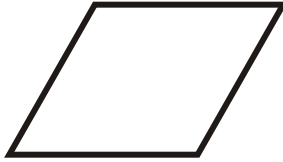
Identify the type of quadrilateral.

1.



\_\_\_\_\_

2.



\_\_\_\_\_

3.



\_\_\_\_\_

4.



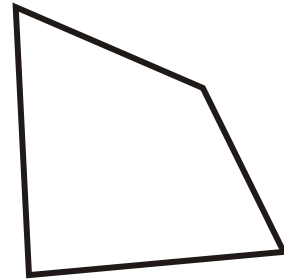
\_\_\_\_\_

5.



\_\_\_\_\_

6.



\_\_\_\_\_

7.



\_\_\_\_\_

8.



\_\_\_\_\_

9.



\_\_\_\_\_


## Types of Quadrilaterals

---

### Grade 6 Geometry Worksheet

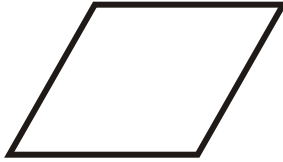
Identify the type of quadrilateral.

1.



Square

2.



Rhombus

3.



Rectangle

4.



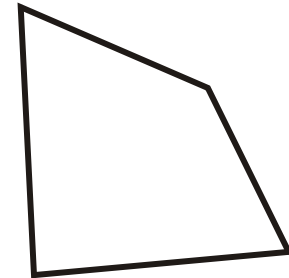
Parallelogram

5.




Trapezoid

6.



Irregular Quadrilateral

7.




Parallelogram

8.



Trapezoid

9.



Parallelogram