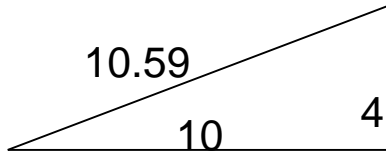


Area of Triangles

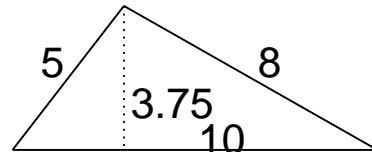
Grade 6 Geometry Worksheet

Find the area.

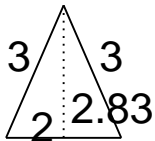
1.



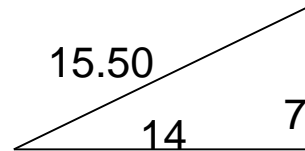
4.



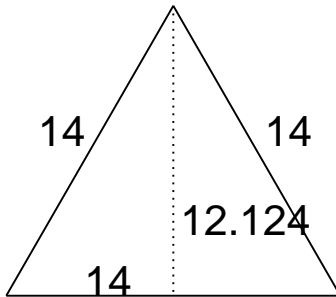
2.



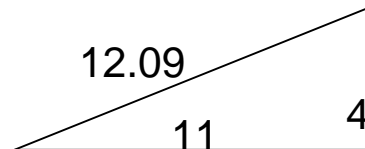
5.



3.



6.

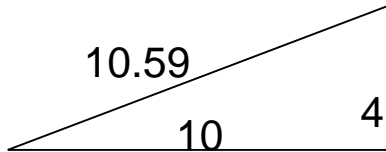


Area of Triangles

Grade 6 Geometry Worksheet

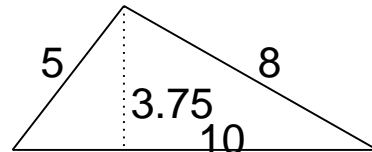
Find the area.

1.



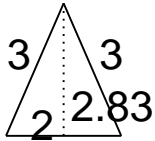
$$A = 20$$

4.



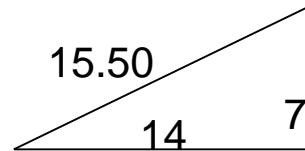
$$A = 18.75$$

2.



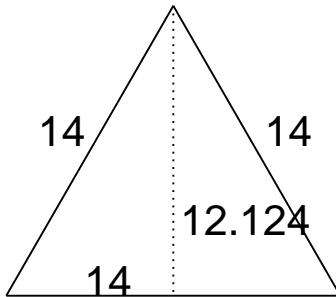
$$A = 2.83$$

5.



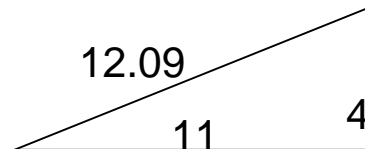
$$A = 49$$

3.



$$A = 84.87$$

6.



$$A = 22$$
