

# Area of triangles and quadrilaterals

---

## Grade 6 Geometry Worksheet

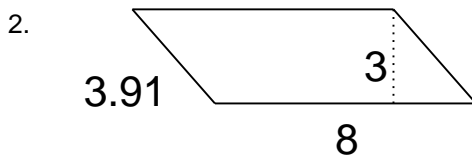
Find the area.



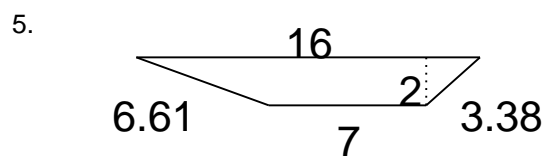

---



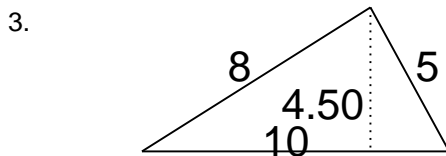

---



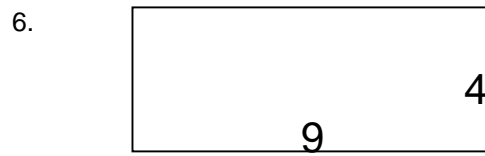

---




---




---




---

# Area of triangles and quadrilaterals

---

## Grade 6 Geometry Worksheet

Find the area.



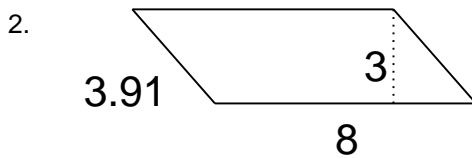
$A = 90$

---



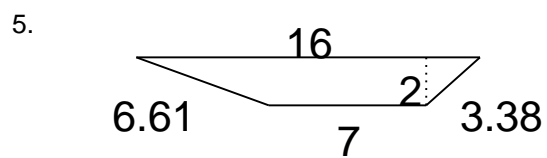
$A = 78$

---



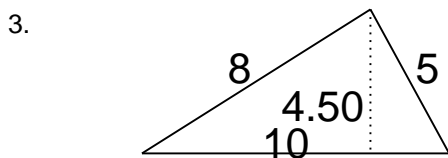
$A = 24$

---



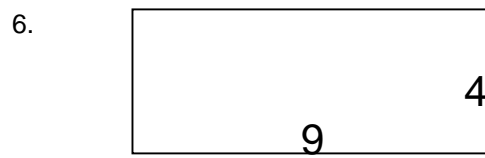
$A = 23$

---



$A = 22.5$

---



$A = 36$

---