

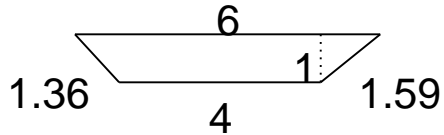
# Area of triangles and quadrilaterals

---

## Grade 6 Geometry Worksheet

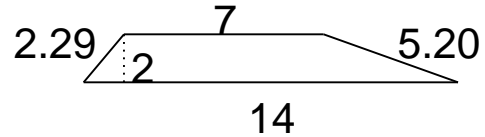
Find the area.

1.



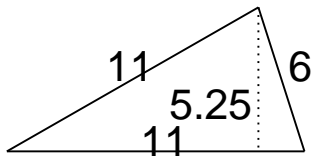

---

4.



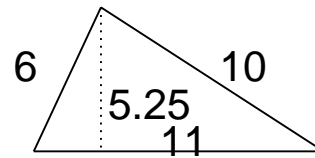

---

2.




---

5.





---

3.




---

6.



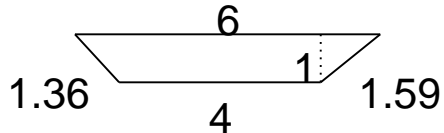

---

# Area of triangles and quadrilaterals

## Grade 6 Geometry Worksheet

Find the area.

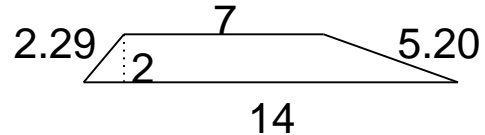
1.



$A = 5$

---

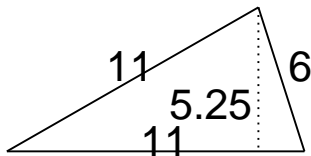
4.



$A = 21$

---

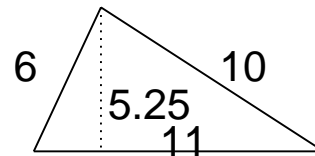
2.



$A = 28.88$

---

5.



$A = 28.88$

---


3.



$A = 119$

---

6.



$A = 65$

---