

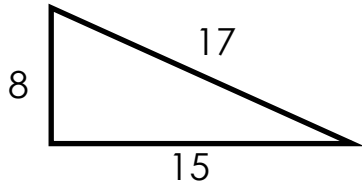
Perimeter and area of triangles and quadrilaterals

Grade 6 Geometry Worksheet

All dimensions shown are inches.

Find the perimeter and area of each shape.

1)



P = _____

A = _____

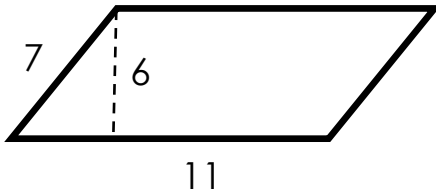
2)



P = _____

A = _____

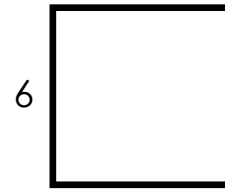
3)



P = _____

A = _____

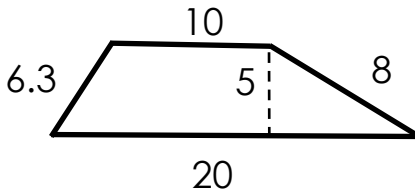
4)



P = _____

A = _____

5)



P = _____

A = _____

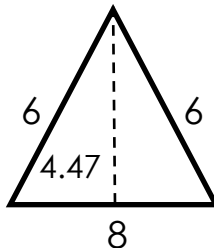
6)



P = _____

A = _____

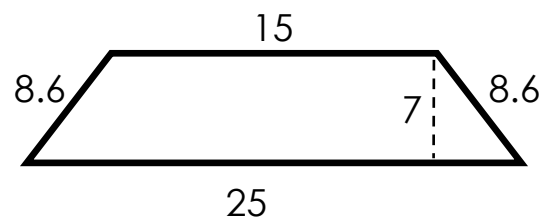
7)



P = _____

A = _____

8)



P = _____

A = _____

Answers

1) $P = 40$ in
 $A = 60$ in²

3) $P = 36$ in
 $A = 66$ in²

5) $P = 44.3$ in
 $A = 75$ in²

7) $P = 20$ in
 $A = 17.88$ in²

2) $P = 60$ in
 $A = 189$ in²

4) $P = 24$ in
 $A = 36$ in²

6) $P = 40$ in
 $A = 73.32$ in²

8) $P = 57.2$ in
 $A = 140$ in²