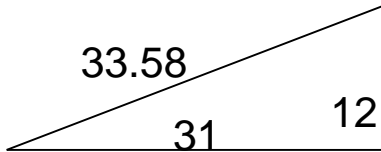


Area of right triangles

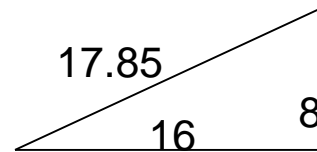
Grade 6 Geometry Worksheet

Find the area.

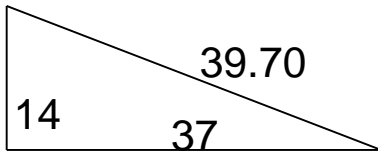
1.



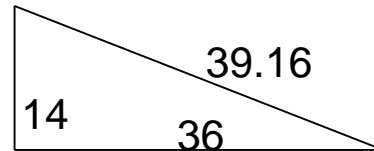
4.



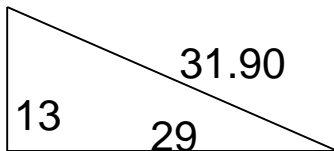
2.



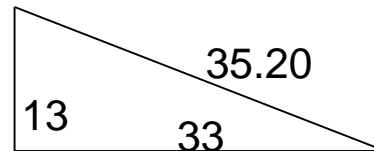
5.



3.



6.

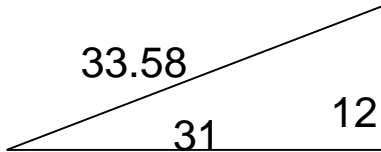


Area of right triangles

Grade 6 Geometry Worksheet

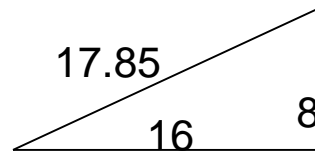
Find the area.

1.



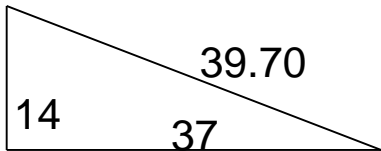
$$A = 186$$

4.



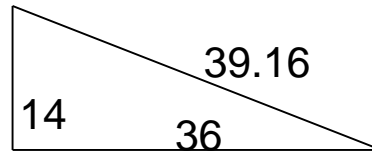
$$A = 64$$

2.



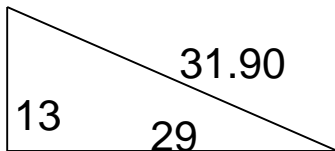
$$A = 259$$

5.



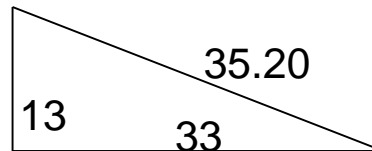
$$A = 252$$

3.



$$A = 188.5$$

6.



$$A = 214.5$$
