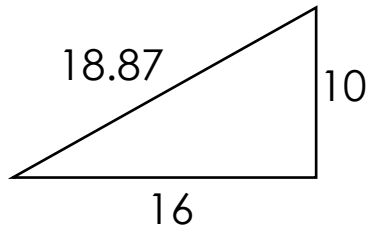


Area of right triangles

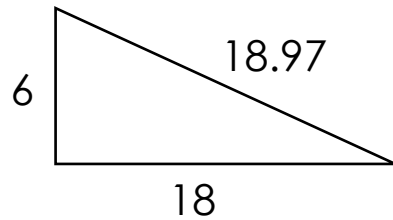
Grade 6 Geometry Worksheet

Find the area.

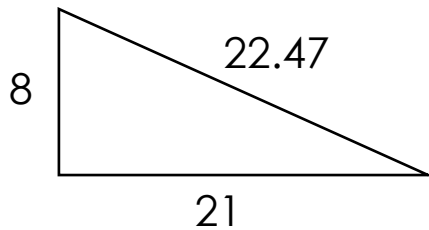
1.



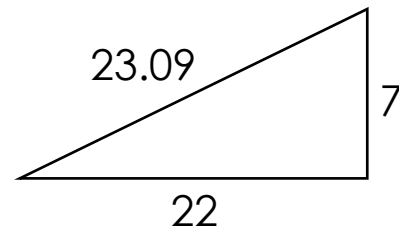
2.



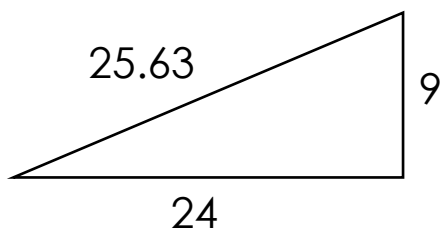
3.



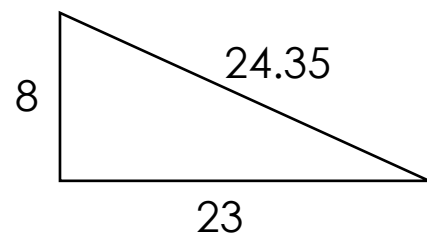
4.



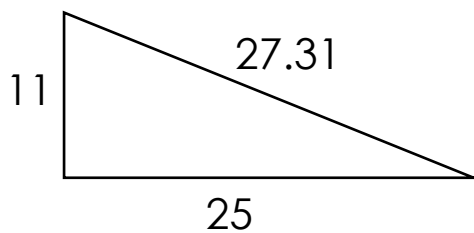
5.



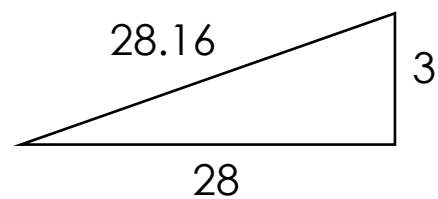
6.



7.



8.



Answers

1) $A = 80$

2) $A = 54$

3) $A = 84$

4) $A = 77$

5) $A = 108$

6) $A = 92$

7) $A = 137.5$

8) $A = 42$