


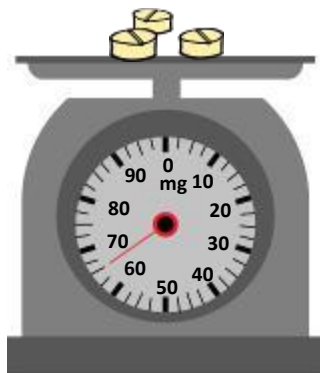
Measure and compare metric weights

Grade 5 Measurement Worksheet

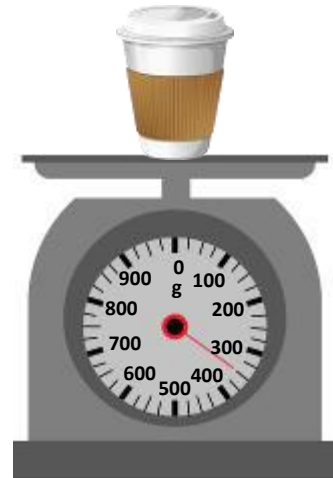
Item A:



Item B:



Item C:



1. Write down the measurement of each item.

Item A: _____ Item B: _____ Item C: _____

2. Convert the measurements of each item into a common unit: grams (g).

Item A: _____ Item B: _____ Item C: _____

3. Rank the items from lightest to heaviest by writing 1-3.

Item A: _____ Item B: _____ Item C: _____

Answers

1. Write down the measurement of each item.

Item A: 9 kg Item B: 65 mg Item C: 350 g

2. Convert the measurements of each item into a common unit: grams (g).

Item A: 9,000 g Item B: 0.065 g Item C: 350 g

3. Rank the items from lightest to heaviest by writing 1-3.

Item A: 3 Item B: 1 Item C: 2