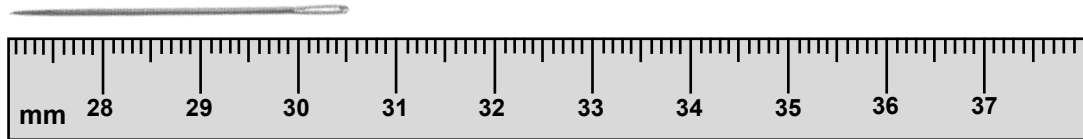


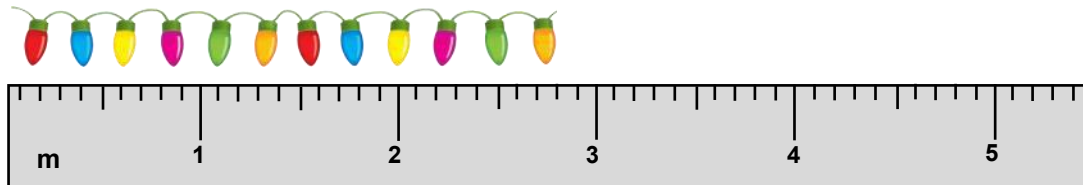
Measure and compare metric lengths

Grade 5 Measurement Worksheet

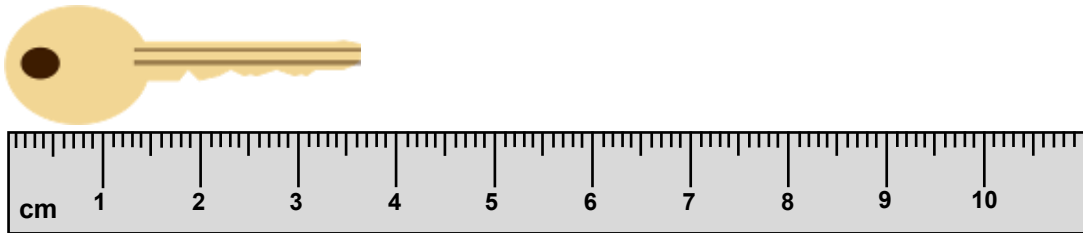
Item A:



Item B:



Item C:



1. Write down the measurement of each item.

Item A: _____ Item B: _____ Item C: _____

2. Convert the measurements of each item into a common unit: centimeters (cm).

Item A: _____ Item B: _____ Item C: _____

3. Rank the items from shortest to longest by writing 1-3.

Item A: _____ Item B: _____ Item C: _____

Answers

1. Write down the measurement of each item.

Item A: 30.5 mm Item B: 2.8 m Item C: 3.6 cm

2. Convert the measurements of each item into a common unit: centimeters (cm).

Item A: 3.05 cm Item B: 280 cm Item C: 3.6 cm

3. Rank the items from shortest to longest by writing 1-3.

Item A: 1 Item B: 3 Item C: 2