



Measure and compare lengths

Grade 5 Measurement Worksheet

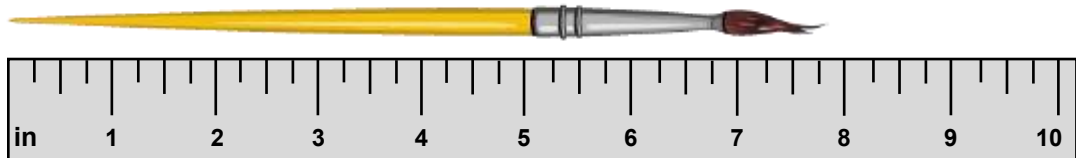
Item A:



Item B:



Item C:



1. Write down the measurement of each item.

Item A: _____ Item B: _____ Item C: _____

2. Convert the measurements of each item into a common unit:
16ths of an inch.

Item A: _____ Item B: _____ Item C: _____

3. Rank the items from shortest to longest by writing 1-3.

Item A: _____ Item B: _____ Item C: _____

Answers

1. Write down the measurement of each item.

Item A: $5 \frac{5}{8}$ in Item B: $3 \frac{3}{16}$ in Item C: $7 \frac{3}{4}$ in

2. Convert the measurements of each item into a common unit:
16ths of an inch.

Item A: $5 \frac{10}{16}$ in Item B: $3 \frac{3}{16}$ in Item C: $7 \frac{12}{16}$ in

3. Rank the items from shortest to longest by writing 1-3.

Item A: 2 Item B: 1 Item C: 3