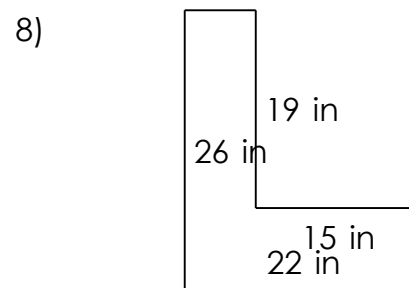
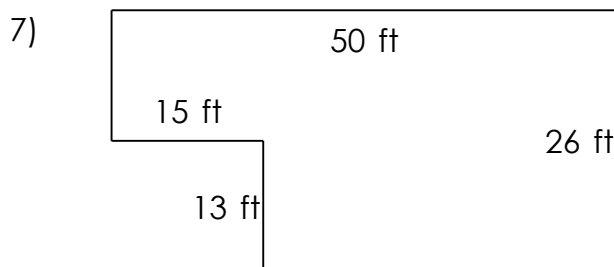
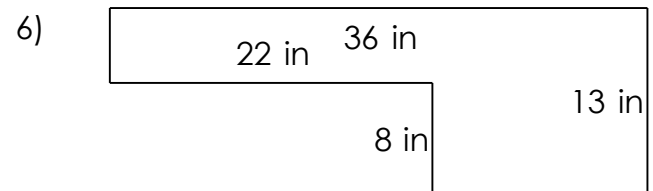
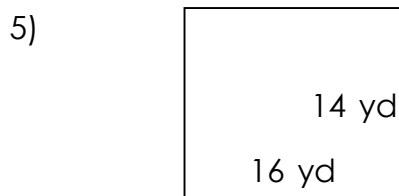
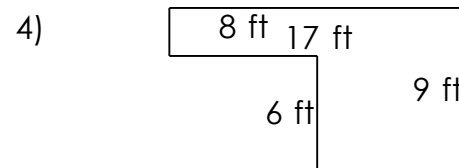
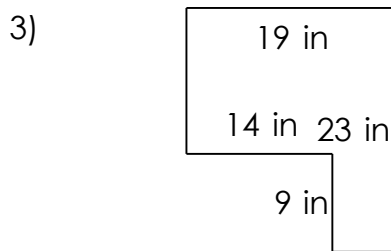
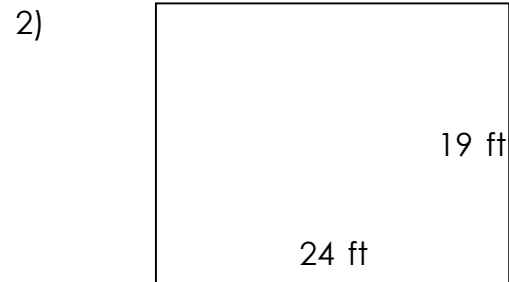
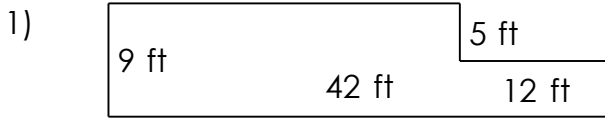


# Rectangular shapes - area and perimeter

## Grade 5 Geometry Worksheet

Find the perimeter and area of each rectangular shape.



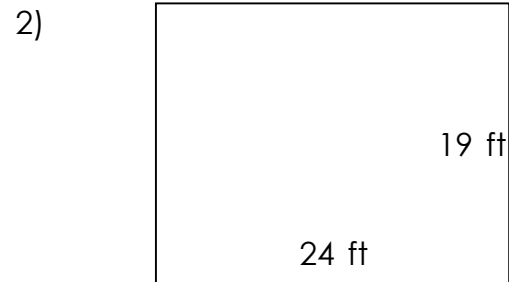
# Rectangular shapes - area and perimeter

## Grade 5 Geometry Worksheet

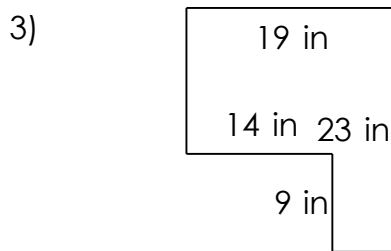
Find the perimeter and area of each rectangular shape.



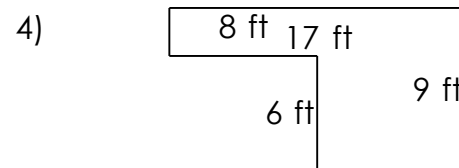
$$P = 102 \text{ ft} \quad A = 318 \text{ ft}^2$$



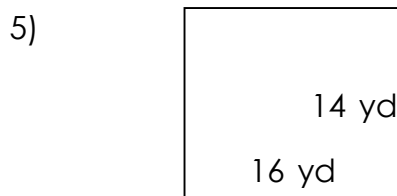
$$P = 86 \text{ ft} \quad A = 456 \text{ ft}^2$$



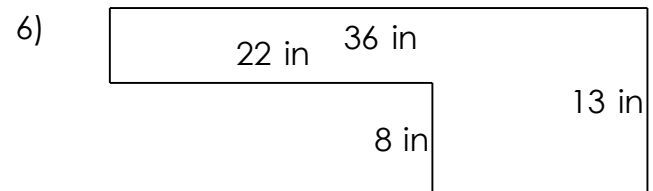
$$P = 84 \text{ in} \quad A = 311 \text{ in}^2$$



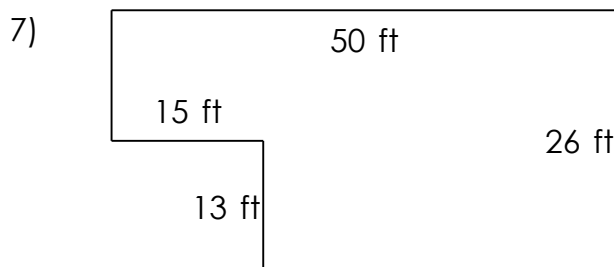
$$P = 52 \text{ ft} \quad A = 105 \text{ ft}^2$$



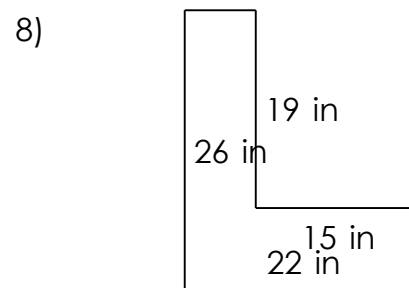
$$P = 60 \text{ yd} \quad A = 224 \text{ yd}^2$$



$$P = 98 \text{ in} \quad A = 292 \text{ in}^2$$



$$P = 152 \text{ ft} \quad A = 1,105 \text{ ft}^2$$



$$P = 96 \text{ in} \quad A = 287 \text{ in}^2$$