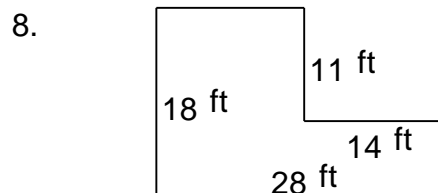
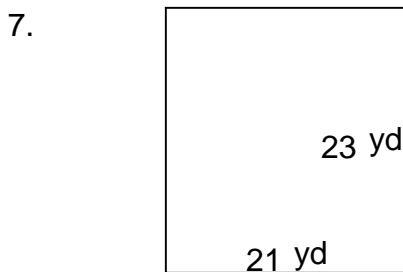
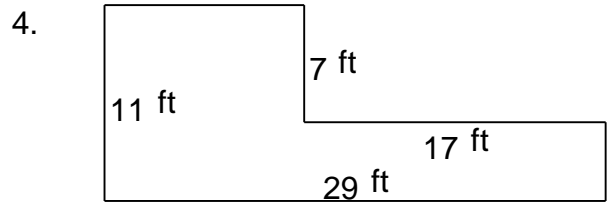
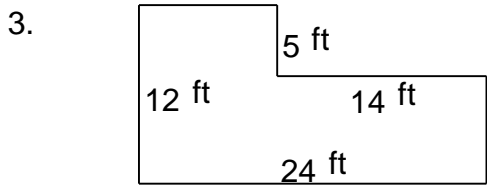
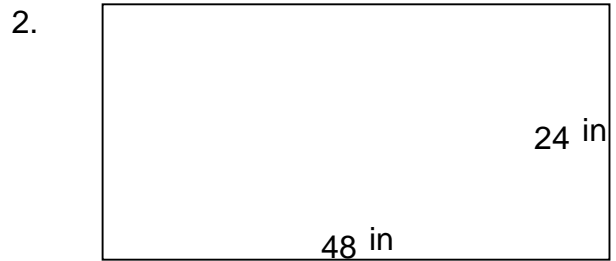
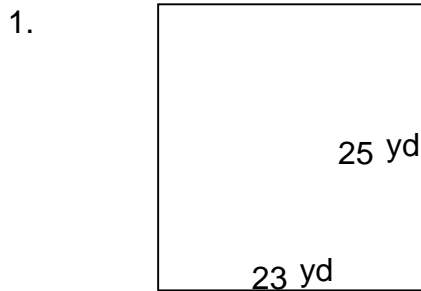


## Rectangular shapes - area and perimeter

---

### Grade 5 Geometry Worksheet

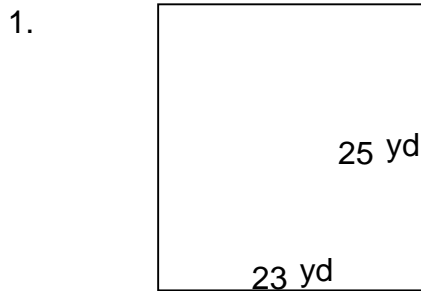
Find the perimeter and area of each rectangular shape.



# Rectangular shapes - area and perimeter

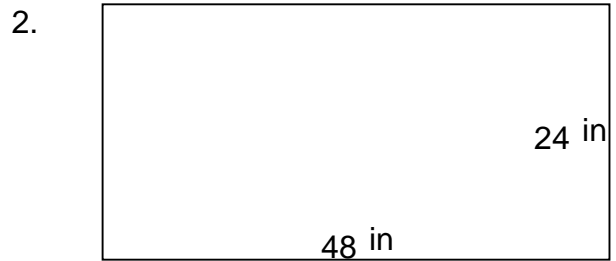
## Grade 5 Geometry Worksheet

Find the perimeter and area of each rectangular shape.



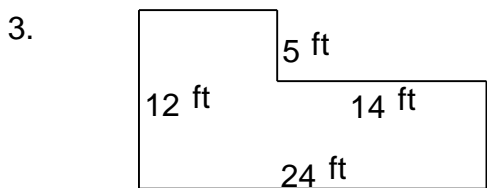
---

$P = 96 \text{ yd}$   $A = 575 \text{ yd}^2$



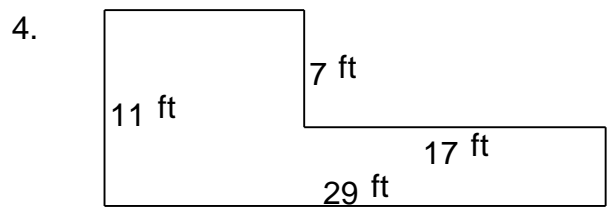
---

$P = 144 \text{ in}$   $A = 1,152 \text{ in}^2$



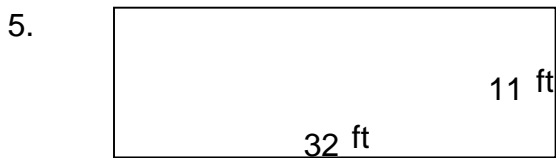
---

$P = 72 \text{ ft}$   $A = 218 \text{ ft}^2$



---

$P = 80 \text{ ft}$   $A = 200 \text{ ft}^2$



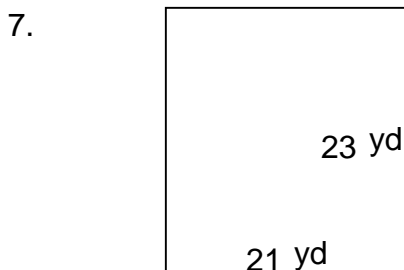
---

$P = 86 \text{ ft}$   $A = 352 \text{ ft}^2$



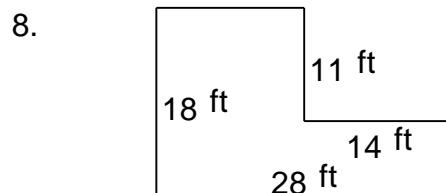
---

$P = 80 \text{ ft}$   $A = 351 \text{ ft}^2$



---

$P = 88 \text{ yd}$   $A = 483 \text{ yd}^2$



---

$P = 92 \text{ ft}$   $A = 350 \text{ ft}^2$