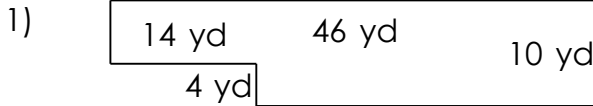


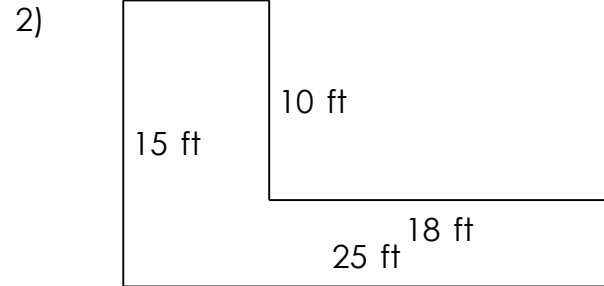
# Rectangular shapes - area and perimeter

## Grade 5 Geometry Worksheet


Find the perimeter and area of each rectangular shape.




---



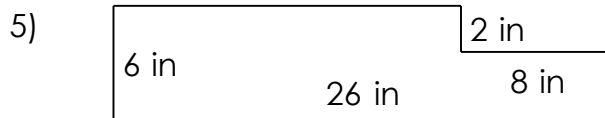

---



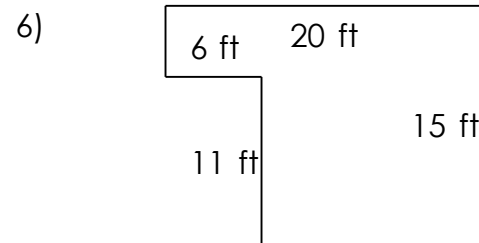

---



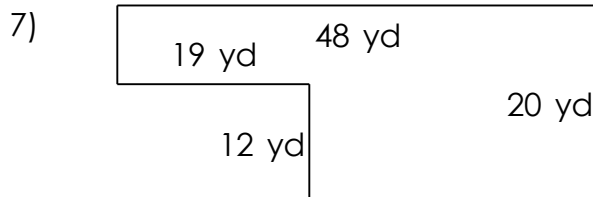

---



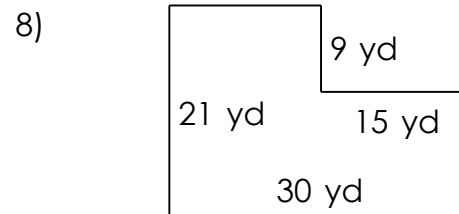

---




---




---

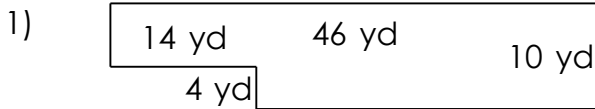



---

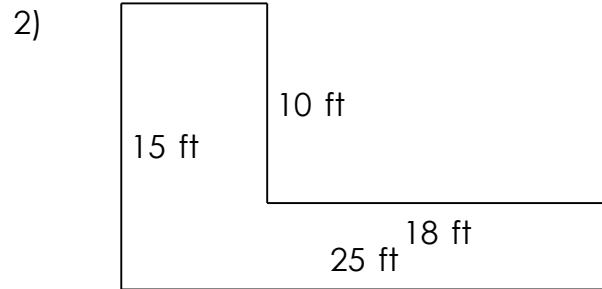
# Rectangular shapes - area and perimeter

## Grade 5 Geometry Worksheet

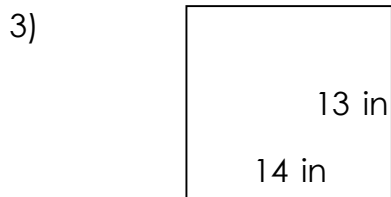
Find the perimeter and area of each rectangular shape.



$P = 112 \text{ yd}$   $A = 404 \text{ yd}^2$



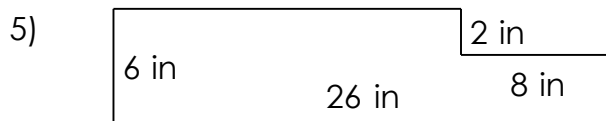
$P = 80 \text{ ft}$   $A = 195 \text{ ft}^2$



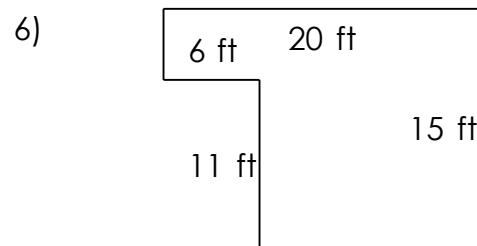
$P = 54 \text{ in}$   $A = 182 \text{ in}^2$



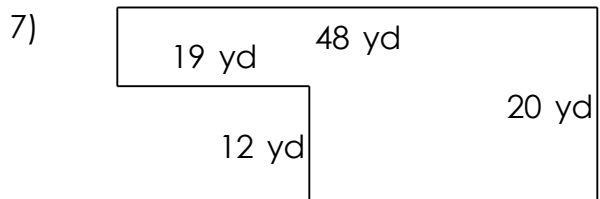
$P = 96 \text{ in}$   $A = 512 \text{ in}^2$



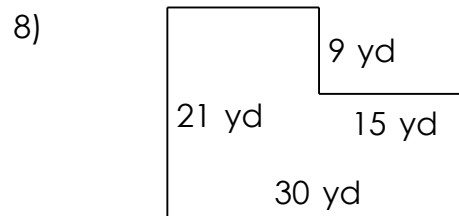
$P = 64 \text{ in}$   $A = 140 \text{ in}^2$



$P = 70 \text{ ft}$   $A = 234 \text{ ft}^2$



$P = 136 \text{ yd}$   $A = 732 \text{ yd}^2$



$P = 102 \text{ yd}$   $A = 495 \text{ yd}^2$