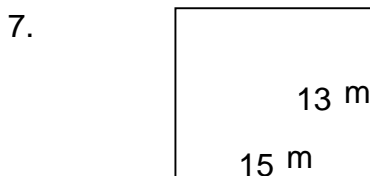
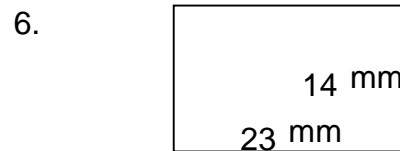
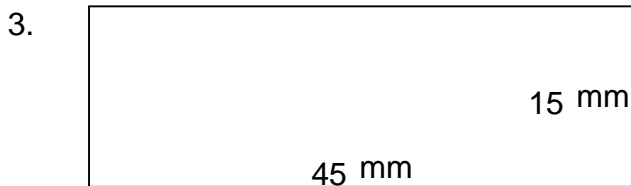
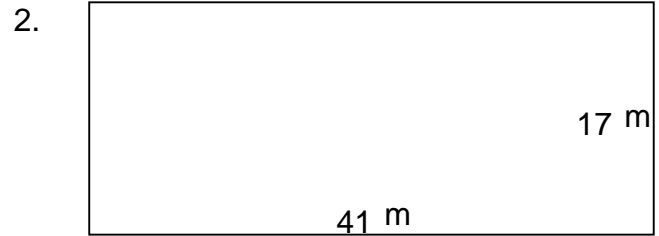


## Rectangles - area and perimeter (metric)

---

### Grade 5 Geometry Worksheet

Find the perimeter and area of each rectangle.



## Rectangles - area and perimeter (metric)

---

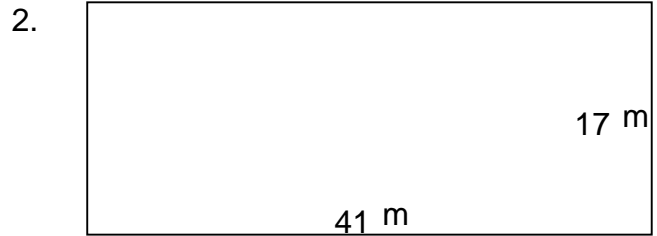
### Grade 5 Geometry Worksheet

Find the perimeter and area of each rectangle.



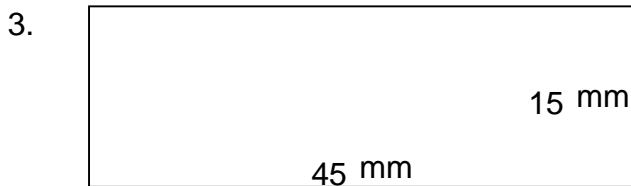
---

$$P = 66 \text{ mm} \quad A = 200 \text{ mm}^2$$



---

$$P = 116 \text{ m} \quad A = 697 \text{ m}^2$$



---

$$P = 120 \text{ mm} \quad A = 675 \text{ mm}^2$$



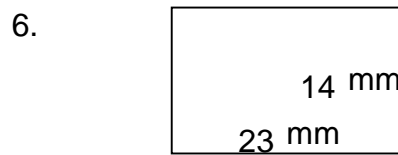
---

$$P = 36 \text{ m} \quad A = 72 \text{ m}^2$$



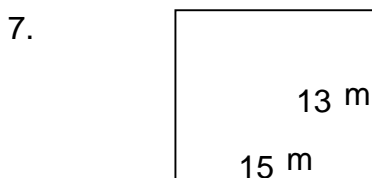
---

$$P = 96 \text{ cm} \quad A = 512 \text{ cm}^2$$



---

$$P = 74 \text{ mm} \quad A = 322 \text{ mm}^2$$



---

$$P = 56 \text{ m} \quad A = 195 \text{ m}^2$$



---

$$P = 78 \text{ m} \quad A = 290 \text{ m}^2$$