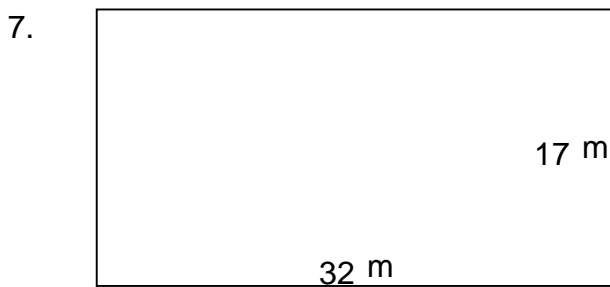
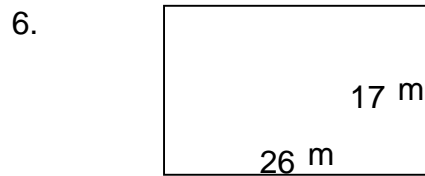

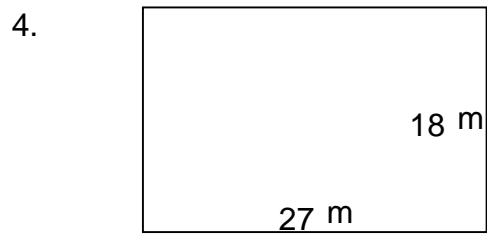
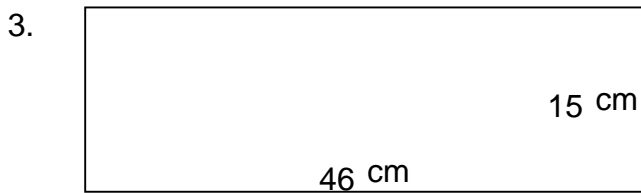
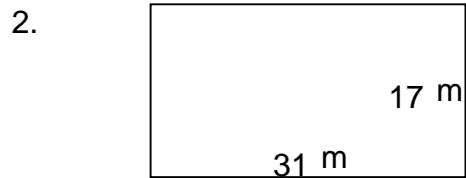
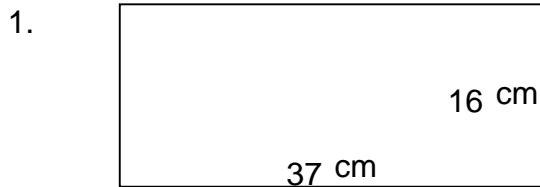


Rectangles - area and perimeter (metric)

Grade 5 Geometry Worksheet


Find the perimeter and area of each rectangle.



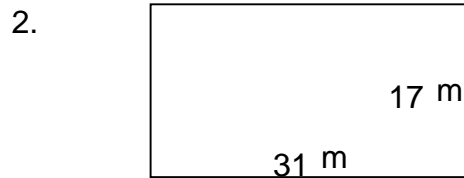
Rectangles - area and perimeter (metric)

Grade 5 Geometry Worksheet

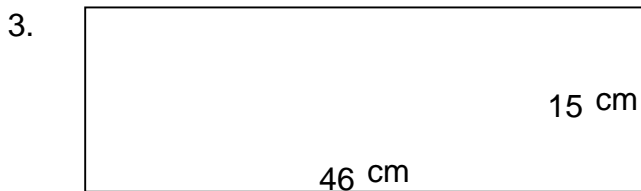
Find the perimeter and area of each rectangle.



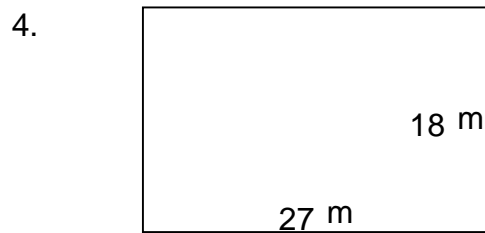
$$P = 106 \text{ cm} \quad A = 592 \text{ cm}^2$$



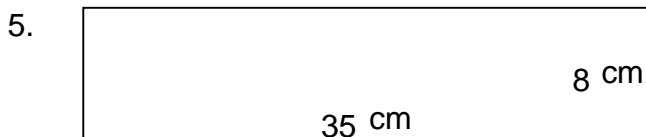
$$P = 96 \text{ m} \quad A = 527 \text{ m}^2$$



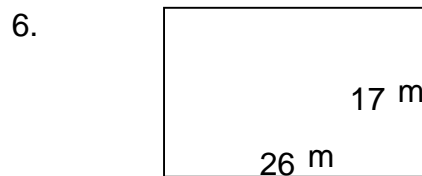
$$P = 122 \text{ cm} \quad A = 690 \text{ cm}^2$$



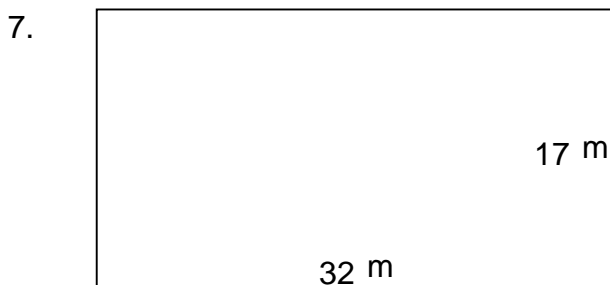
$$P = 90 \text{ m} \quad A = 486 \text{ m}^2$$



$$P = 86 \text{ cm} \quad A = 280 \text{ cm}^2$$



$$P = 86 \text{ m} \quad A = 442 \text{ m}^2$$



$$P = 98 \text{ m} \quad A = 544 \text{ m}^2$$



$$P = 112 \text{ cm} \quad A = 588 \text{ cm}^2$$