

Rectangles - area and perimeter (metric)

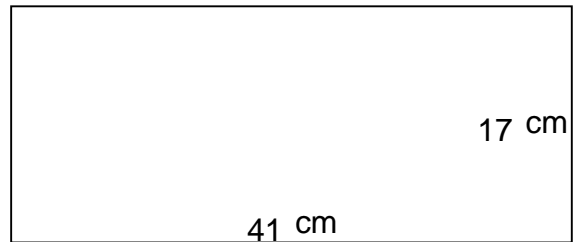
Grade 5 Geometry Worksheet

Find the perimeter and area of each rectangle.

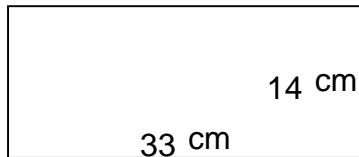
1.



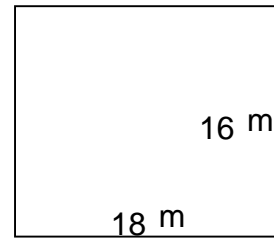
2.



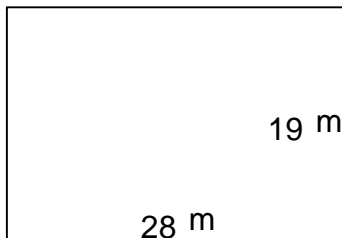
3.



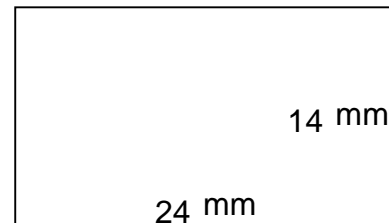
4.



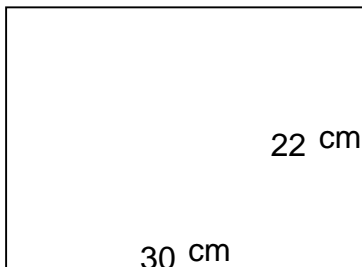
5.



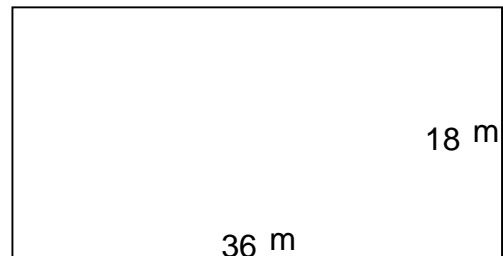
6.



7.



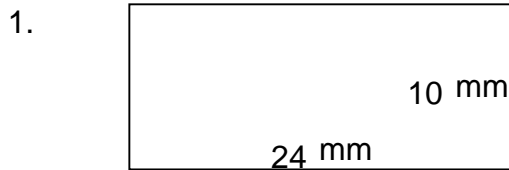
8.



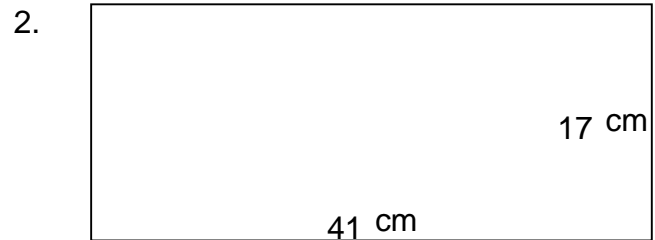
Rectangles - area and perimeter (metric)

Grade 5 Geometry Worksheet

Find the perimeter and area of each rectangle.



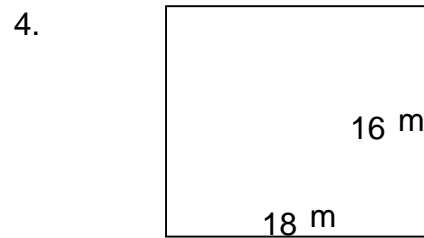
$P = 68 \text{ mm}$ $A = 240 \text{ mm}^2$



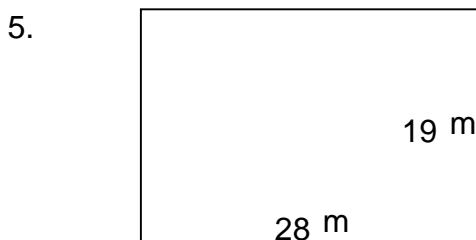
$P = 116 \text{ cm}$ $A = 697 \text{ cm}^2$



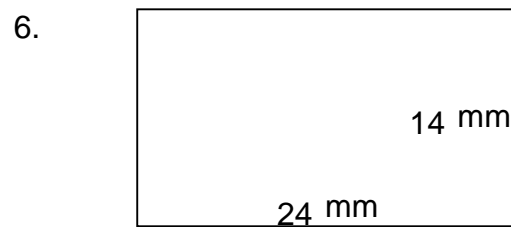
$P = 94 \text{ cm}$ $A = 462 \text{ cm}^2$



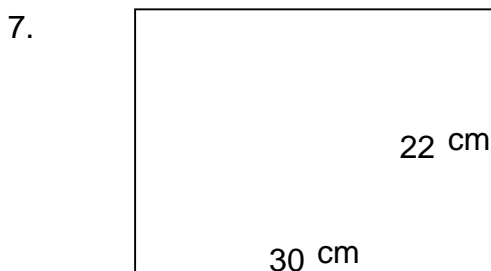
$P = 68 \text{ m}$ $A = 288 \text{ m}^2$



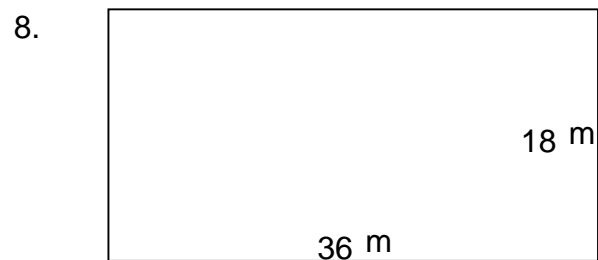
$P = 94 \text{ m}$ $A = 532 \text{ m}^2$



$P = 76 \text{ mm}$ $A = 336 \text{ mm}^2$



$P = 104 \text{ cm}$ $A = 660 \text{ cm}^2$



$P = 108 \text{ m}$ $A = 648 \text{ m}^2$