


Rectangles - area and perimeter

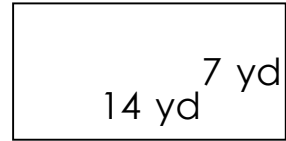
Grade 5 Geometry Worksheet

Find the perimeter and area of each rectangle.

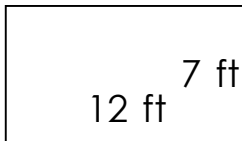
1)



2)



3)



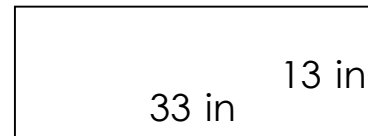
4)



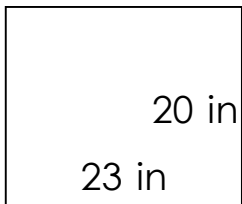
5)



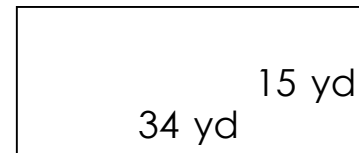
6)



7)



8)



Rectangles - area and perimeter

Grade 5 Geometry Worksheet

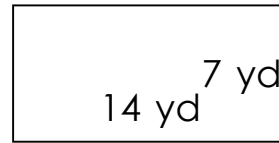
Find the perimeter and area of each rectangle.

1)



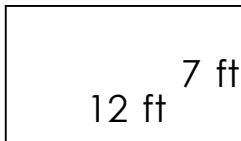
$$P = 90 \text{ in} \quad A = 486 \text{ in}^2$$

2)



$$P = 42 \text{ yd} \quad A = 98 \text{ yd}^2$$

3)



$$P = 38 \text{ ft} \quad A = 84 \text{ ft}^2$$

4)



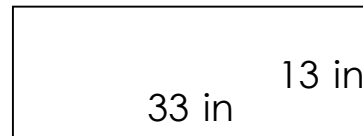
$$P = 76 \text{ in} \quad A = 312 \text{ in}^2$$

5)



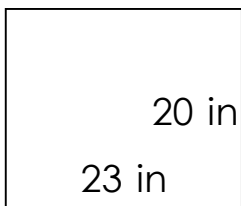
$$P = 100 \text{ in} \quad A = 576 \text{ in}^2$$

6)



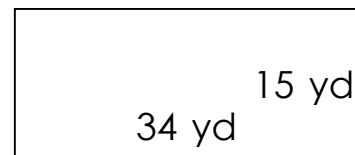
$$P = 92 \text{ in} \quad A = 429 \text{ in}^2$$

7)



$$P = 86 \text{ in} \quad A = 460 \text{ in}^2$$

8)



$$P = 98 \text{ yd} \quad A = 510 \text{ yd}^2$$