
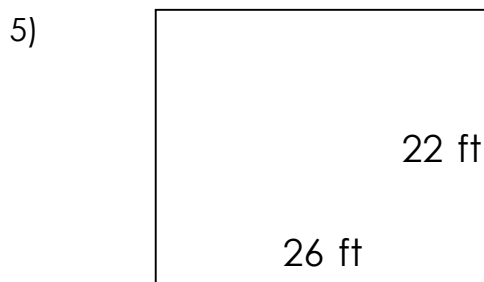
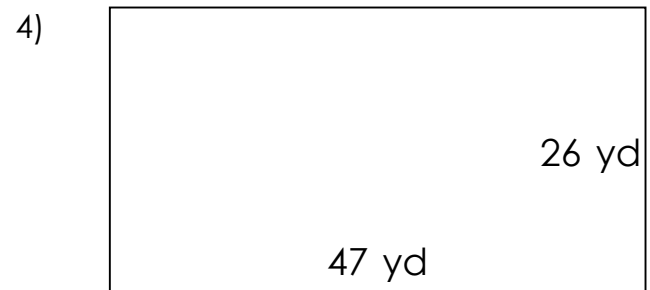
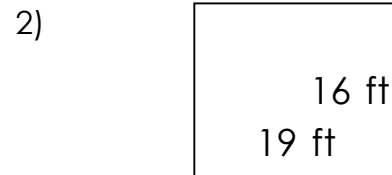


## Rectangles - area and perimeter

### Grade 5 Geometry Worksheet


Find the perimeter and area of each rectangle.



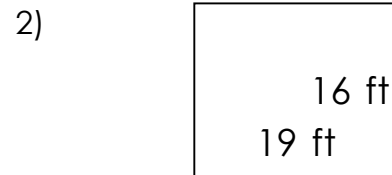
## Rectangles - area and perimeter

### Grade 5 Geometry Worksheet

Find the perimeter and area of each rectangle.




$P = 54 \text{ ft}$   $A = 126 \text{ ft}^2$



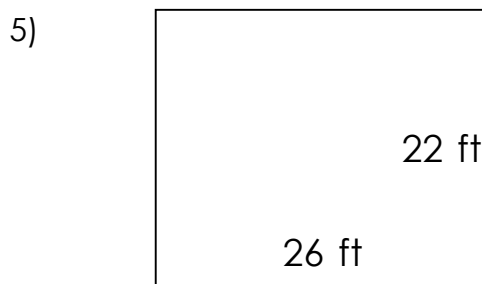
$P = 70 \text{ ft}$   $A = 304 \text{ ft}^2$



$P = 94 \text{ in}$   $A = 522 \text{ in}^2$




$P = 146 \text{ yd}$   $A = 1,222 \text{ yd}^2$



$P = 96 \text{ ft}$   $A = 572 \text{ ft}^2$



$P = 88 \text{ ft}$   $A = 420 \text{ ft}^2$



$P = 66 \text{ in}$   $A = 270 \text{ in}^2$



$P = 76 \text{ ft}$   $A = 312 \text{ ft}^2$