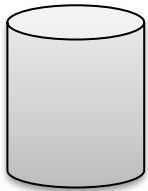
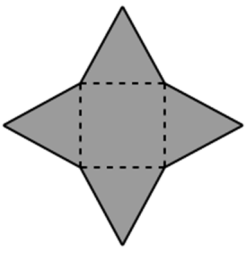
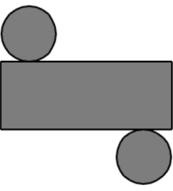
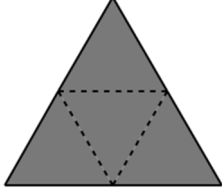

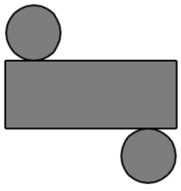
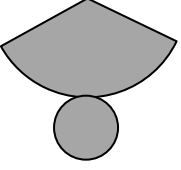
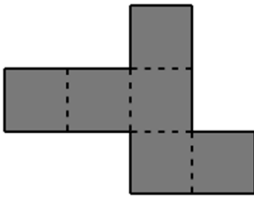

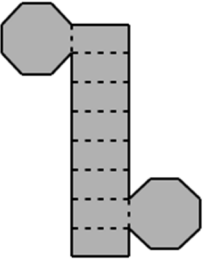
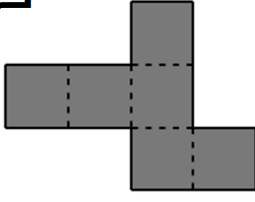
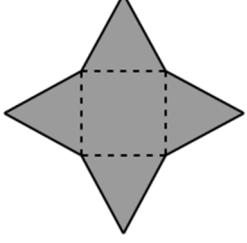
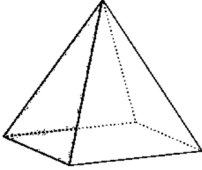
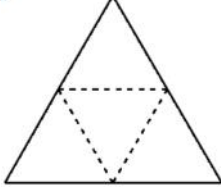
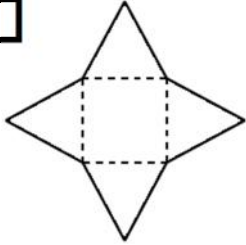
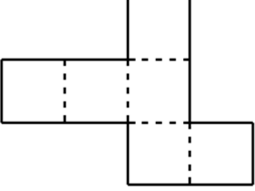
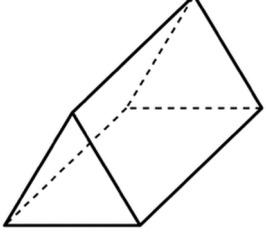
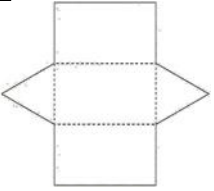
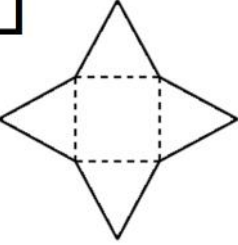
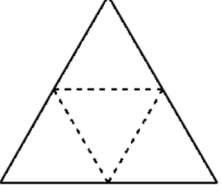


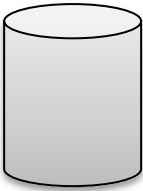
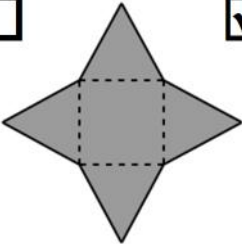
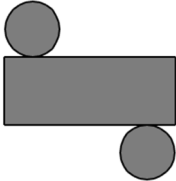
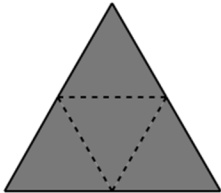

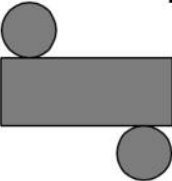
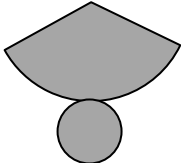
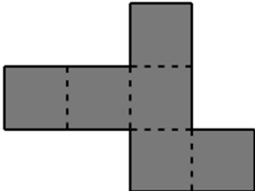

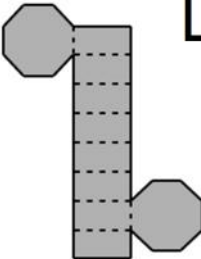
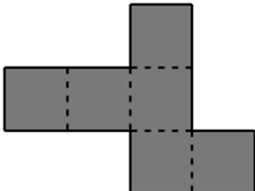
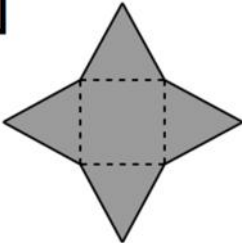
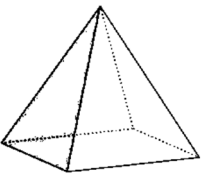
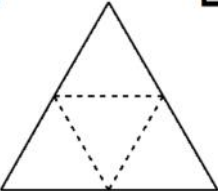
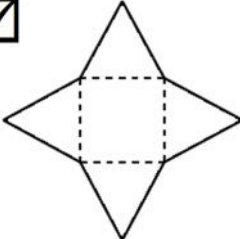
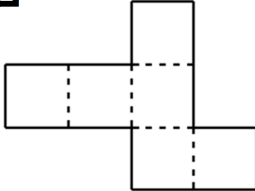
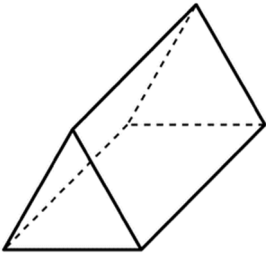
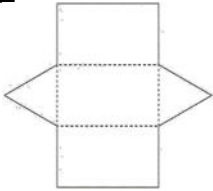
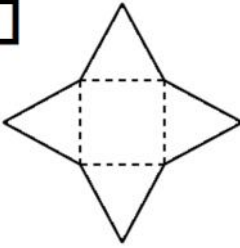
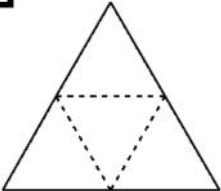
Identifying nets

Grade 5 Geometry Worksheet

Which nets on the right can make the shape on the left?

| | | | |
|---|--|---|--|
|  | <input type="checkbox"/>  | <input type="checkbox"/>  | <input type="checkbox"/>  |
|  | <input type="checkbox"/>  | <input type="checkbox"/>  | <input type="checkbox"/>  |
|  | <input type="checkbox"/>  | <input type="checkbox"/>  | <input type="checkbox"/>  |
|  | <input type="checkbox"/>  | <input type="checkbox"/>  | <input type="checkbox"/>  |
|  | <input type="checkbox"/>  | <input type="checkbox"/>  | <input type="checkbox"/>  |

Answers

| | |
|---|--|
|  | <input type="checkbox"/>  <input checked="" type="checkbox"/>  <input type="checkbox"/>  |
|  | <input type="checkbox"/>  <input checked="" type="checkbox"/>  <input type="checkbox"/>  |
|  | <input checked="" type="checkbox"/>  <input type="checkbox"/>  <input type="checkbox"/>  |
|  | <input type="checkbox"/>  <input checked="" type="checkbox"/>  <input type="checkbox"/>  |
|  | <input checked="" type="checkbox"/>  <input type="checkbox"/>  <input type="checkbox"/>  |