

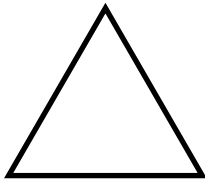
Classifying triangles

Grade 5 Geometry Worksheet

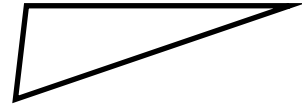
On each triangle, mark all equal sides or equal angles.

Then, classify each triangle as **equilateral**, **isosceles**, **scalene** or **right**.

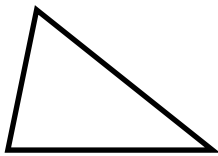
1)



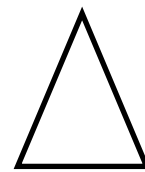
2)



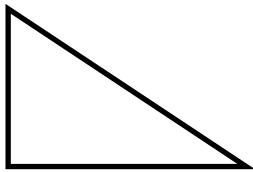
3)



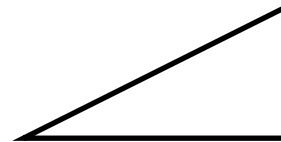
4)



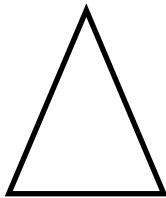
5)



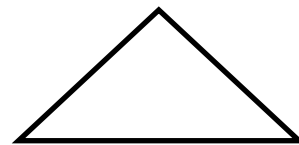
6)



7)

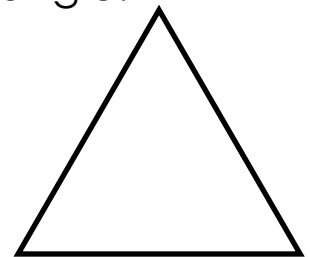


8)



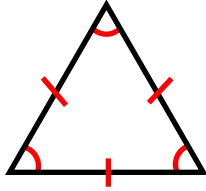
Measure each angle of the triangle and label the triangle.

What type of triangle is it? Explain.



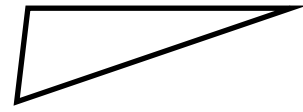
Answers

1)



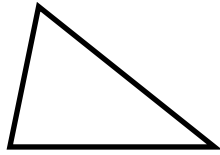
Equilateral triangle

2)




Scalene triangle

3)



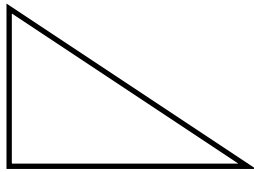
Scalene triangle

4)



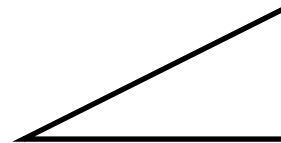
Isosceles triangle

5)



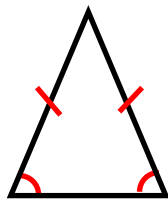
Right triangle

6)



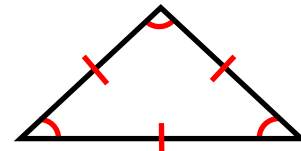
Right triangle

7)



Isosceles triangle

8)

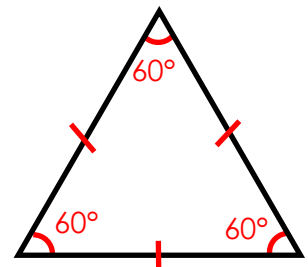


Equilateral triangle

Measure each angle of the triangle and label the triangle.

What type of triangle is it? Explain.

It is an equilateral triangle because all the sides are the same length and all angles are 60° .



equilateral triangle