

Measure and classify angles

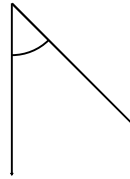
Grade 5 Geometry Worksheet

Measure the angle with a protractor. Is it acute, obtuse or a right angle?

1.



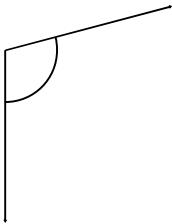
2.



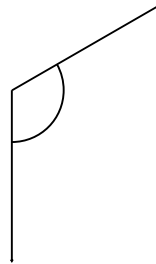
3.



4.



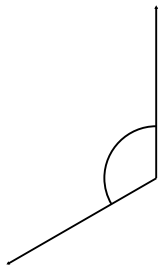
5.



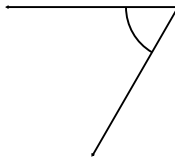
6.



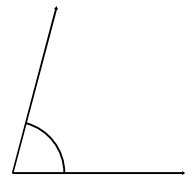
7.



8.



9.



Measure and classify angles

Grade 5 Geometry Worksheet

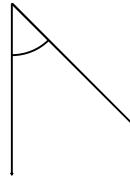
Measure the angle with a protractor. Is it acute, obtuse or a right angle?

1.



165° Obtuse

2.



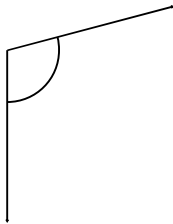
45° Acute

3.



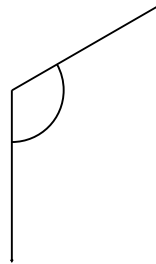
165° Obtuse

4.



105° Obtuse

5.



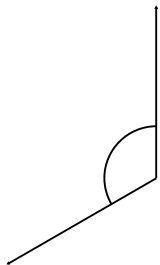
120° Obtuse

6.



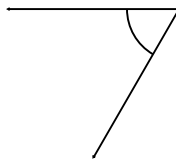
135° Obtuse

7.



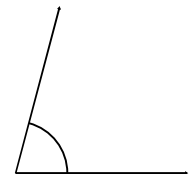
120° Obtuse

8.



60° Acute

9.



75° Acute