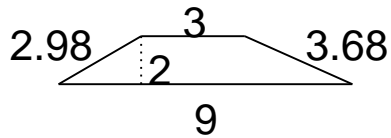


Area of Triangles, Parallelograms and Trapezoids

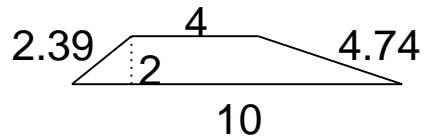
Grade 5 Geometry Worksheet

Find the area.

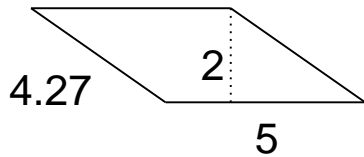
1.



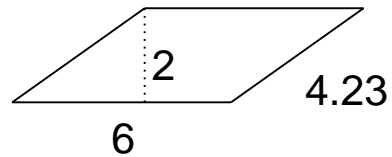
4.



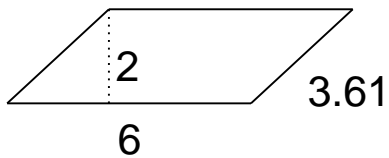
2.



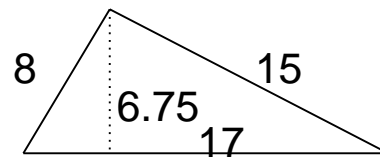
5.



3.



6.

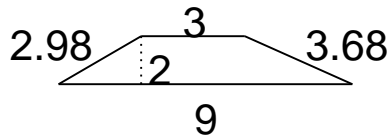


Area of Triangles, Parallelograms and Trapezoids

Grade 5 Geometry Worksheet

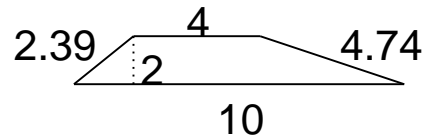
Find the area.

1.



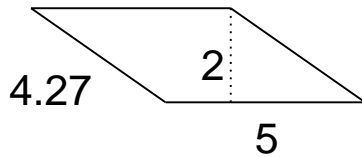
$A = 12$

4.



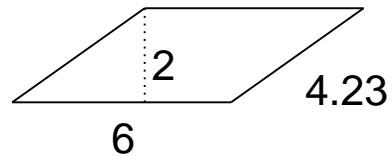
$A = 14$

2.



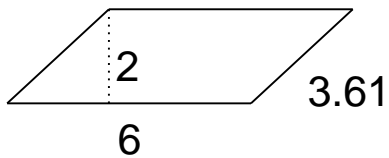
$A = 10$

5.



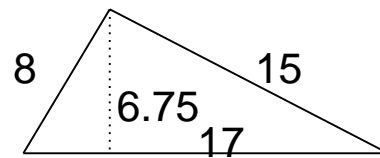
$A = 12$

3.



$A = 12$

6.



$A = 57.38$