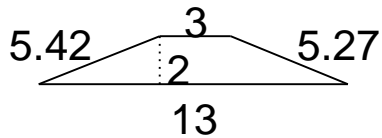


Area of Triangles, Parallelograms and Trapezoids

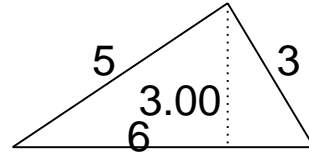
Grade 5 Geometry Worksheet

Find the area.

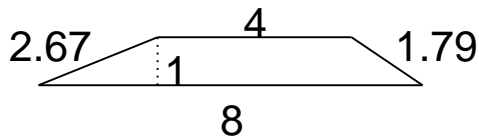
1.



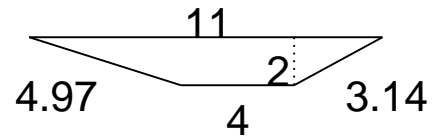
4.



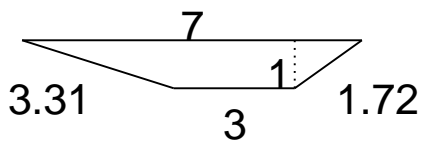
2.



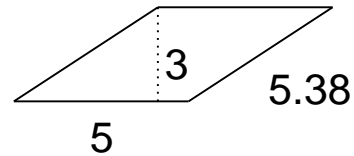
5.



3.



6.

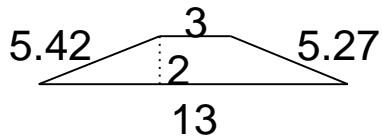


Area of Triangles, Parallelograms and Trapezoids

Grade 5 Geometry Worksheet

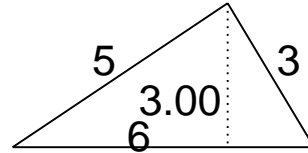
Find the area.

1.



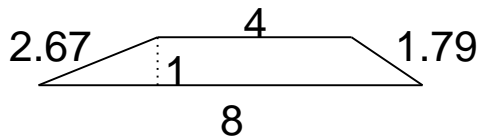
$A = 16$

4.



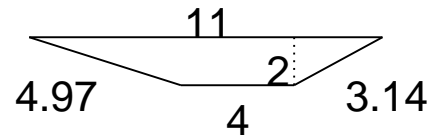
$A = 9$

2.



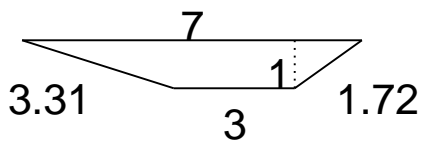
$A = 6$

5.



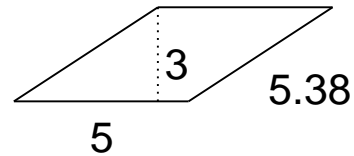
$A = 15$

3.



$A = 5$

6.



$A = 15$