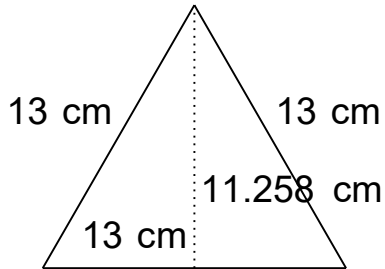


Area of Isosceles and Right Triangles

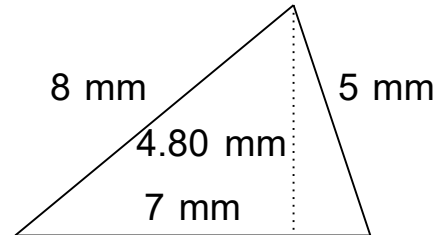
Grade 5 Geometry Worksheet

Find the area of each triangle.

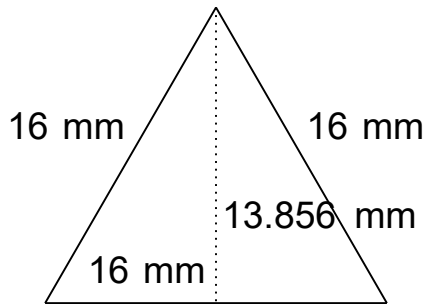
1)



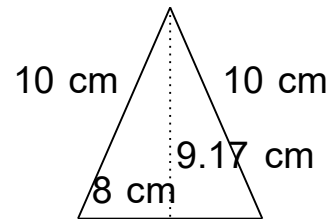
2)



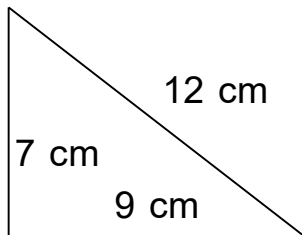
3)



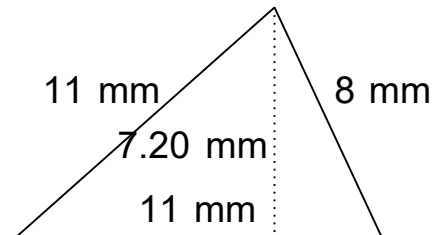
4)



5)



6)

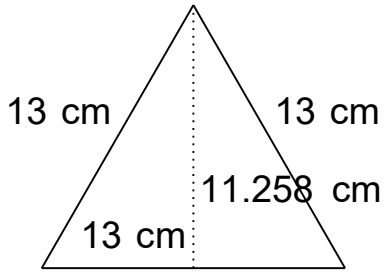


Area of Isosceles and Right Triangles

Grade 5 Geometry Worksheet

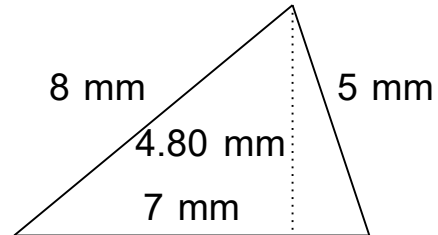
Find the area of each triangle.

1)



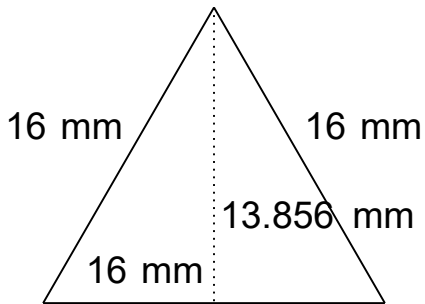
$$A = 73.18 \text{ cm}^2$$

2)



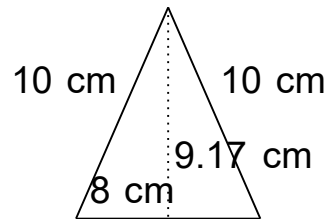
$$A = 16.8 \text{ mm}^2$$

3)



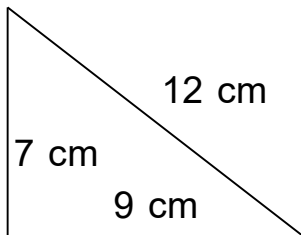
$$A = 110.85 \text{ mm}^2$$

4)



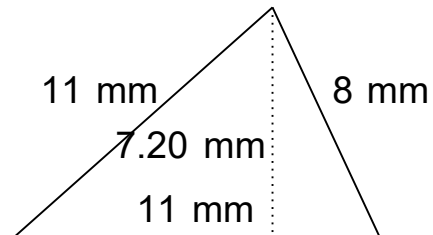
$$A = 36.68 \text{ cm}^2$$

5)



$$A = 31.5 \text{ cm}^2$$

6)



$$A = 39.6 \text{ mm}^2$$