

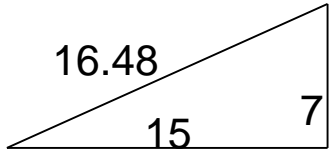
## Area of Right Triangles

---

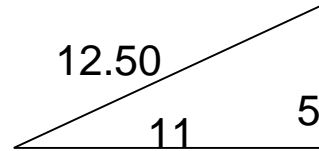
### Grade 5 Geometry Worksheet

Find the area.

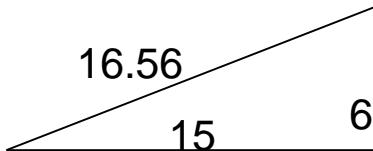
1.



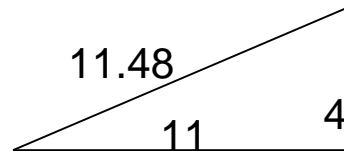
4.



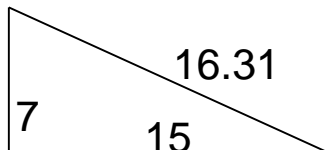
2.



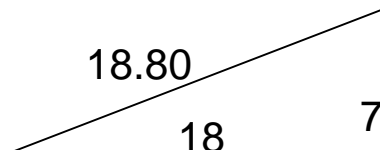
5.



3.



6.



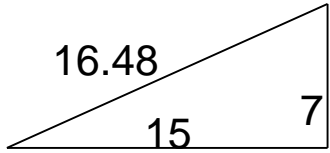
## Area of Right Triangles

---

### Grade 5 Geometry Worksheet

Find the area.

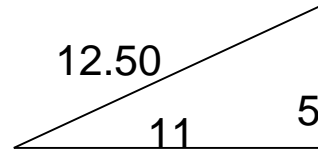
1.



$A = 52.5$

---

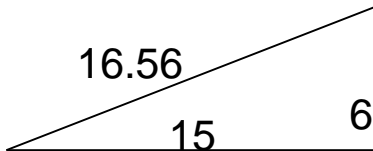
4.



$A = 27.5$

---

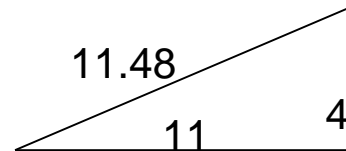
2.



$A = 45$

---

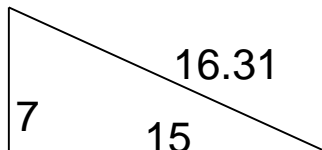
5.



$A = 22$

---

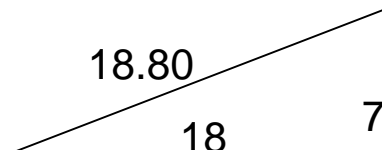
3.



$A = 52.5$

---

6.



$A = 63$

---