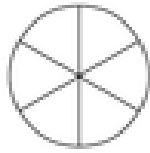


Equivalent fractions

Grade 4 Fractions Worksheet

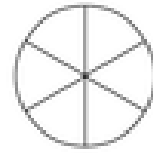
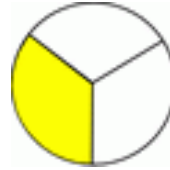
Color in the second fraction so it is equivalent to the first fraction, then write in the numerators and denominators of both fractions.

1)



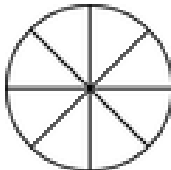
$$\frac{\quad}{\quad} = \frac{\quad}{\quad}$$

2)



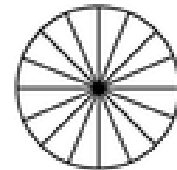
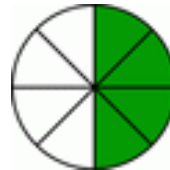
$$\frac{\quad}{\quad} = \frac{\quad}{\quad}$$

3)



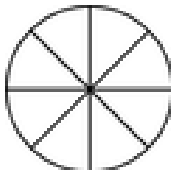
$$\frac{\quad}{\quad} = \frac{\quad}{\quad}$$

4)



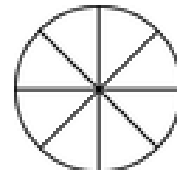
$$\frac{\quad}{\quad} = \frac{\quad}{\quad}$$

5)



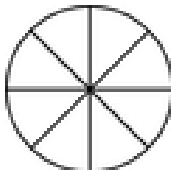
$$\frac{\quad}{\quad} = \frac{\quad}{\quad}$$

6)



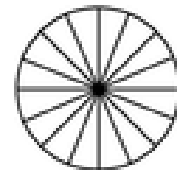
$$\frac{\quad}{\quad} = \frac{\quad}{\quad}$$

7)



$$\frac{\quad}{\quad} = \frac{\quad}{\quad}$$

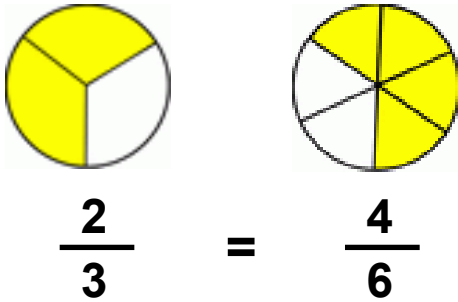
8)



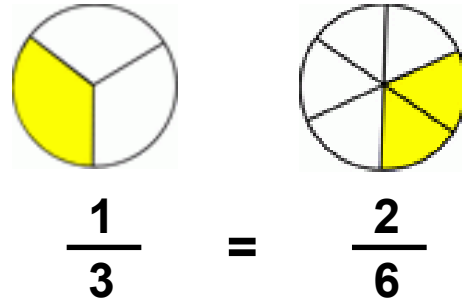
$$\frac{\quad}{\quad} = \frac{\quad}{\quad}$$

Answers

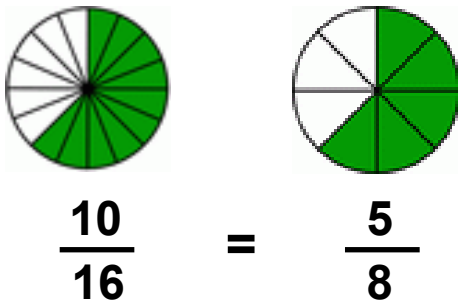
1)



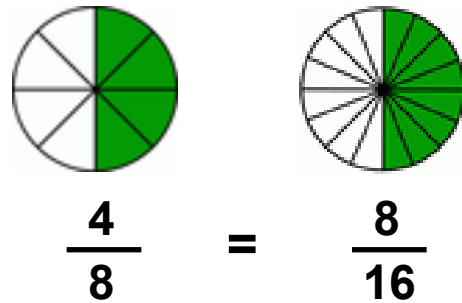
2)



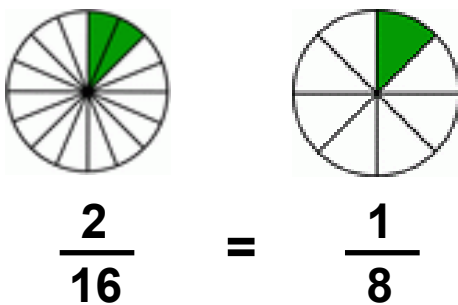
3)



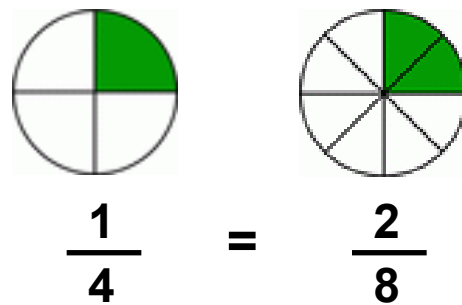
4)



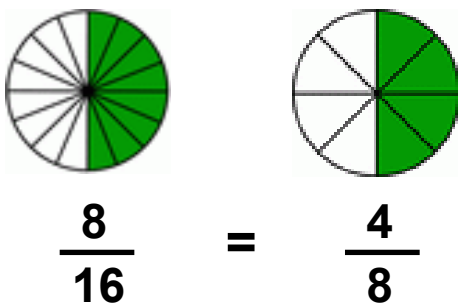
5)



6)



7)



8)

