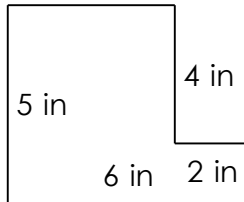


# Rectangular shapes - area and perimeter

## Grade 4 Geometry Worksheet

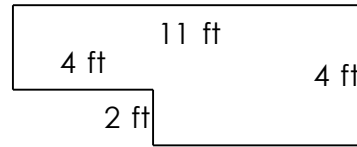
Find the perimeter and area of each rectangular shape.

1)



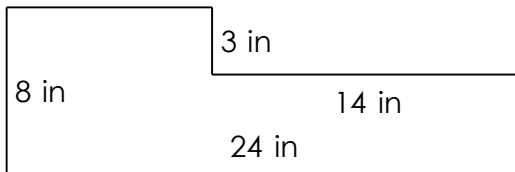

---

2)



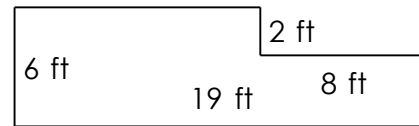

---

3)



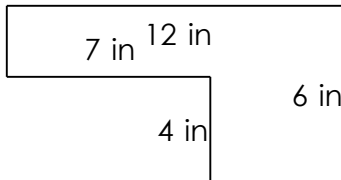

---

4)





---

5)



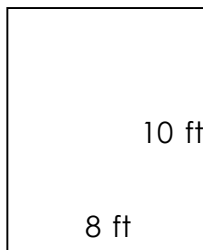

---

6)



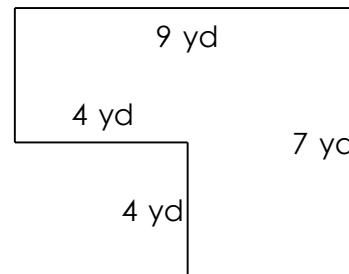

---

7)




---

8)



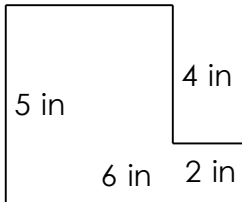

---

# Rectangular shapes - area and perimeter

## Grade 4 Geometry Worksheet

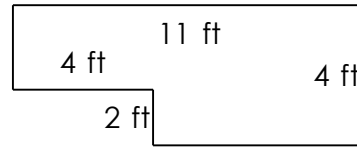
Find the perimeter and area of each rectangular shape.

1)



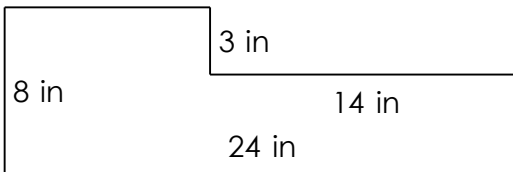
$$P = 22 \text{ in} \quad A = 22 \text{ in}^2$$

2)



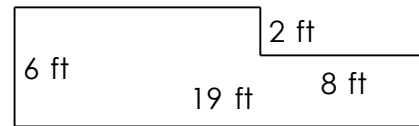
$$P = 30 \text{ ft} \quad A = 36 \text{ ft}^2$$

3)



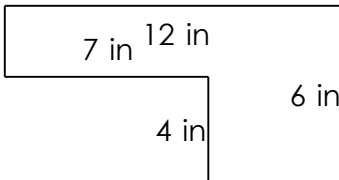
$$P = 64 \text{ in} \quad A = 150 \text{ in}^2$$

4)




$$P = 50 \text{ ft} \quad A = 98 \text{ ft}^2$$

5)



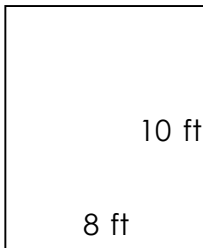
$$P = 36 \text{ in} \quad A = 44 \text{ in}^2$$

6)



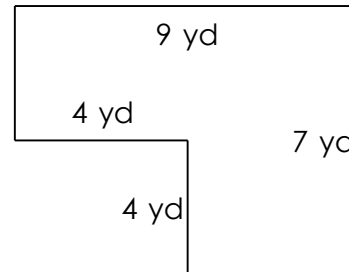
$$P = 44 \text{ yd} \quad A = 112 \text{ yd}^2$$

7)



$$P = 36 \text{ ft} \quad A = 80 \text{ ft}^2$$

8)



$$P = 32 \text{ yd} \quad A = 47 \text{ yd}^2$$