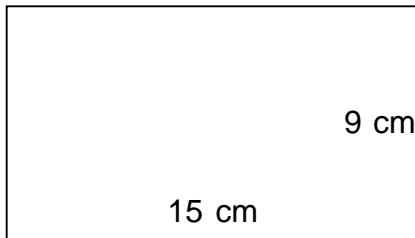


Rectangles - area and perimeter (metric)

Grade 4 Geometry Worksheet

Find the perimeter and area of each rectangle.

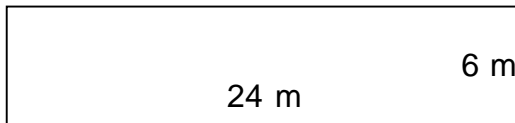
1.



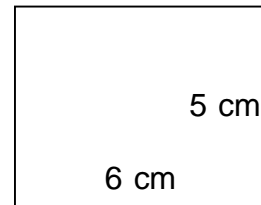
2.



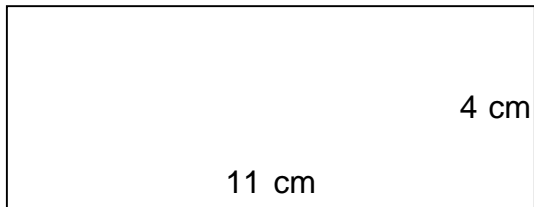
3.



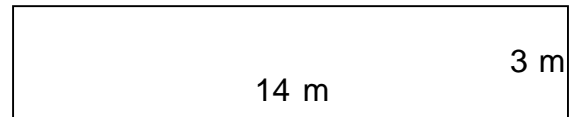
4.



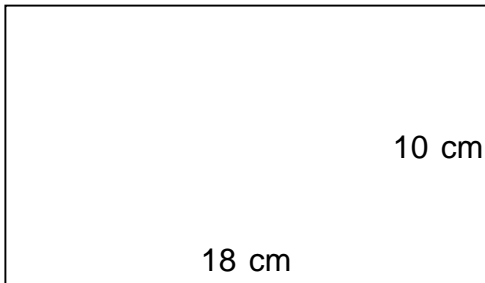
5.



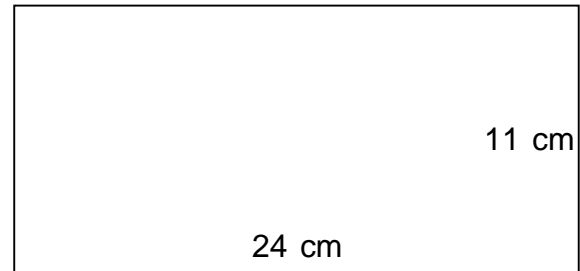
6.



7.



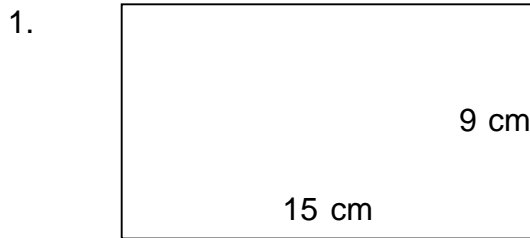
8.



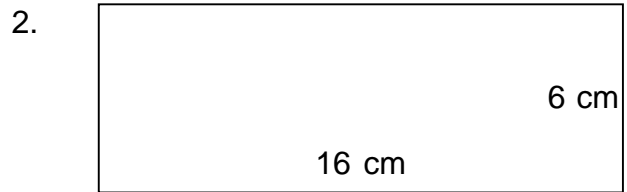
Rectangles - area and perimeter (metric)

Grade 4 Geometry Worksheet

Find the perimeter and area of each rectangle.



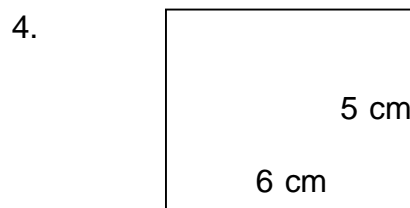
$P = 48 \text{ cm}$ $A = 135 \text{ cm}^2$



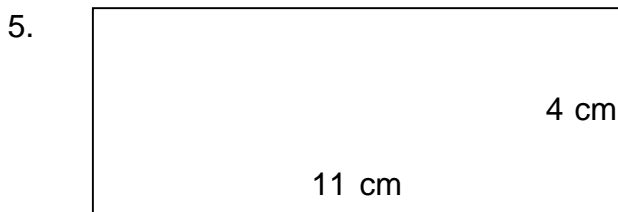
$P = 44 \text{ cm}$ $A = 96 \text{ cm}^2$




$P = 60 \text{ m}$ $A = 144 \text{ m}^2$



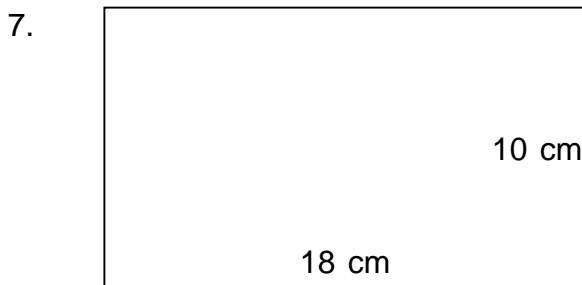
$P = 22 \text{ cm}$ $A = 30 \text{ cm}^2$



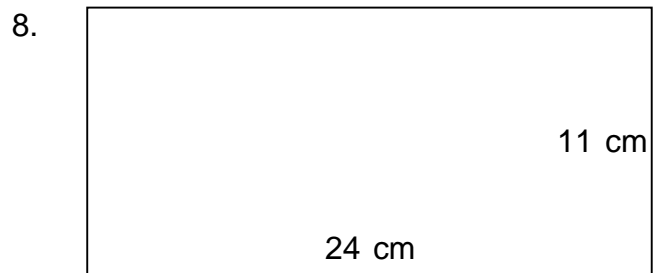
$P = 30 \text{ cm}$ $A = 44 \text{ cm}^2$



$P = 34 \text{ m}$ $A = 42 \text{ m}^2$



$P = 56 \text{ cm}$ $A = 180 \text{ cm}^2$



$P = 70 \text{ cm}$ $A = 264 \text{ cm}^2$