

Rectangles - area and perimeter

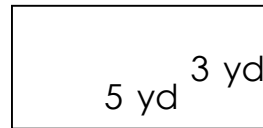
Grade 4 Geometry Worksheet

Find the perimeter and area of each rectangle.

1)



2)




3)




4)



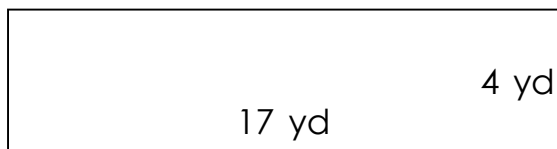
5)



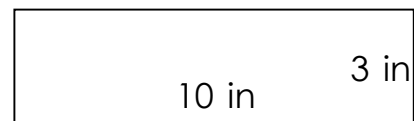
6)



7)



8)



Rectangles - area and perimeter

Grade 4 Geometry Worksheet

Find the perimeter and area of each rectangle.

1)



$$P = 44 \text{ ft} \quad A = 117 \text{ ft}^2$$

2)




$$P = 16 \text{ yd} \quad A = 15 \text{ yd}^2$$

3)




$$P = 36 \text{ in} \quad A = 56 \text{ in}^2$$

4)



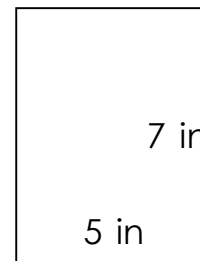
$$P = 18 \text{ in} \quad A = 18 \text{ in}^2$$

5)



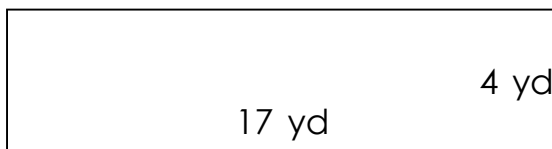
$$P = 24 \text{ in} \quad A = 32 \text{ in}^2$$

6)




$$P = 24 \text{ in} \quad A = 35 \text{ in}^2$$

7)



$$P = 42 \text{ yd} \quad A = 68 \text{ yd}^2$$

8)



$$P = 26 \text{ in} \quad A = 30 \text{ in}^2$$