

Rectangles - area and perimeter

Grade 4 Geometry Worksheet

Find the perimeter and area of each rectangle.

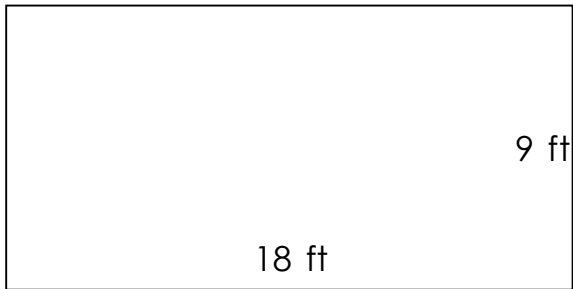
1)



2)



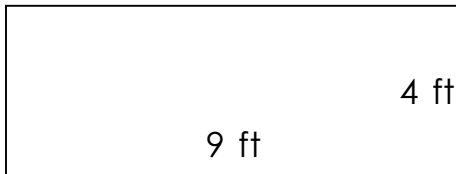
3)



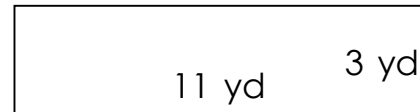
4)



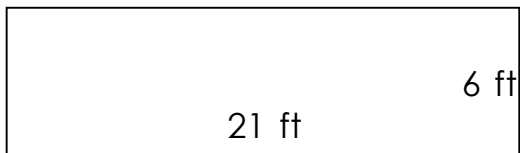
5)



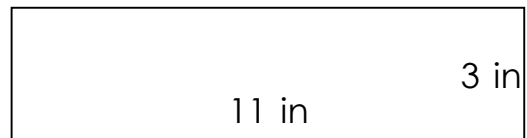
6)



7)



8)



Rectangles - area and perimeter

Grade 4 Geometry Worksheet

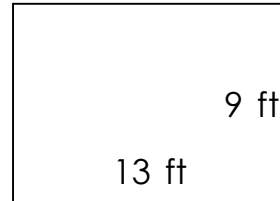
Find the perimeter and area of each rectangle.

1)



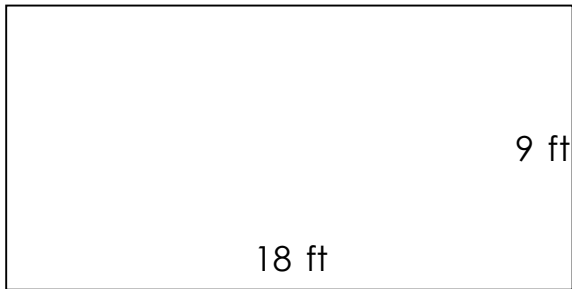
$$P = 46 \text{ ft} \quad A = 90 \text{ ft}^2$$

2)



$$P = 44 \text{ ft} \quad A = 117 \text{ ft}^2$$

3)



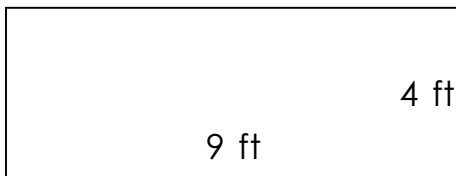
$$P = 54 \text{ ft} \quad A = 162 \text{ ft}^2$$

4)



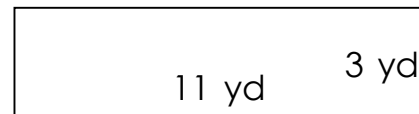
$$P = 68 \text{ in} \quad A = 240 \text{ in}^2$$

5)



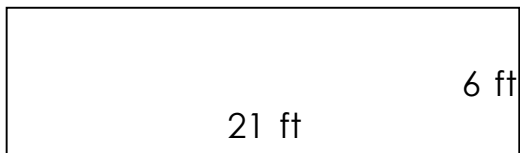
$$P = 26 \text{ ft} \quad A = 36 \text{ ft}^2$$

6)



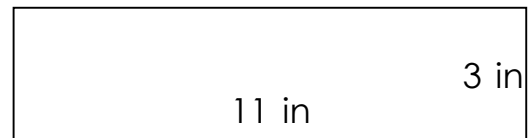
$$P = 28 \text{ yd} \quad A = 33 \text{ yd}^2$$

7)



$$P = 54 \text{ ft} \quad A = 126 \text{ ft}^2$$

8)



$$P = 28 \text{ in} \quad A = 33 \text{ in}^2$$