

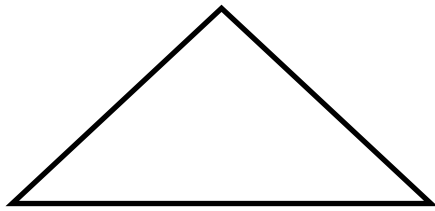
# Classifying triangles

## Grade 4 Geometry Worksheet

On each triangle, mark all equal sides or equal angles.

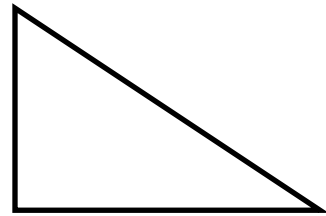
Then, classify each triangle as **equilateral**, **isosceles**, **scalene** or **right**.

1)



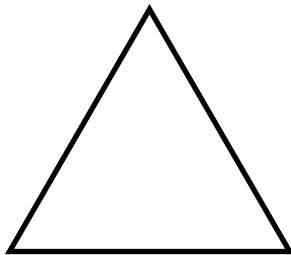
---

2)



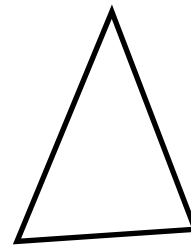
---

3)



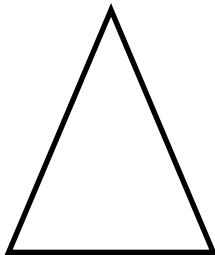
---

4)



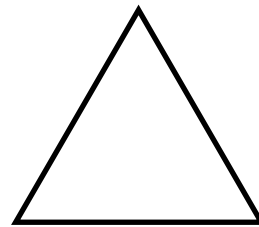
---

5)



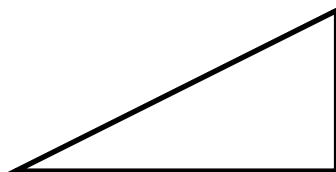
---

6)



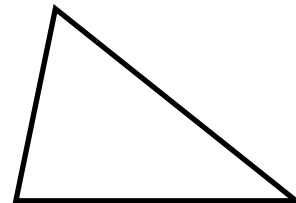
---

7)



---

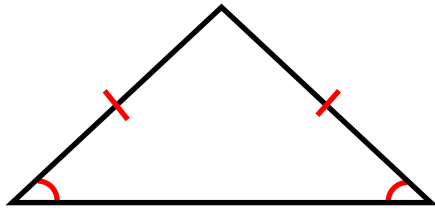
8)



---

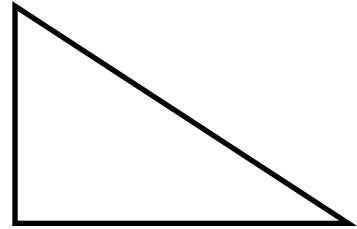
# Answers

1)



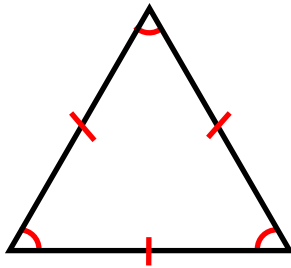
Isosceles triangle

2)



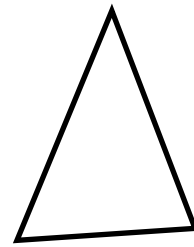
Right triangle

3)



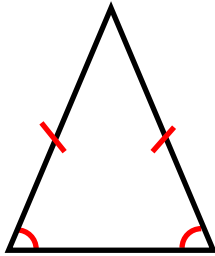
Equilateral triangle

4)



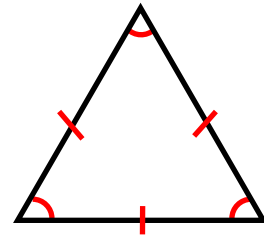
Scalene triangle

5)



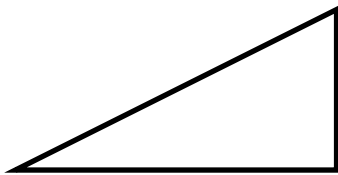
Isosceles triangle

6)



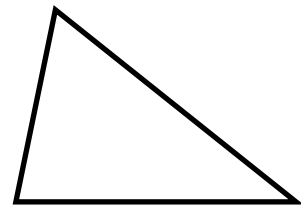
Equilateral triangle

7)



Right triangle

8)



Scalene triangle