














Mystery message

Grade 4 Geometry Worksheet

Determine the mystery place: look up the coordinates and write down the letter for each vehicle.

 = E	 = R	 = K	 = A	 = C	 = G
 = H	 = L	 = N	 = I	 = Z	 = O



MYSTERY PLACE:

(3,3) (1,6) (1,5) (1,2) (3,6) (8,1) (5,5) (6,6) (4,1)

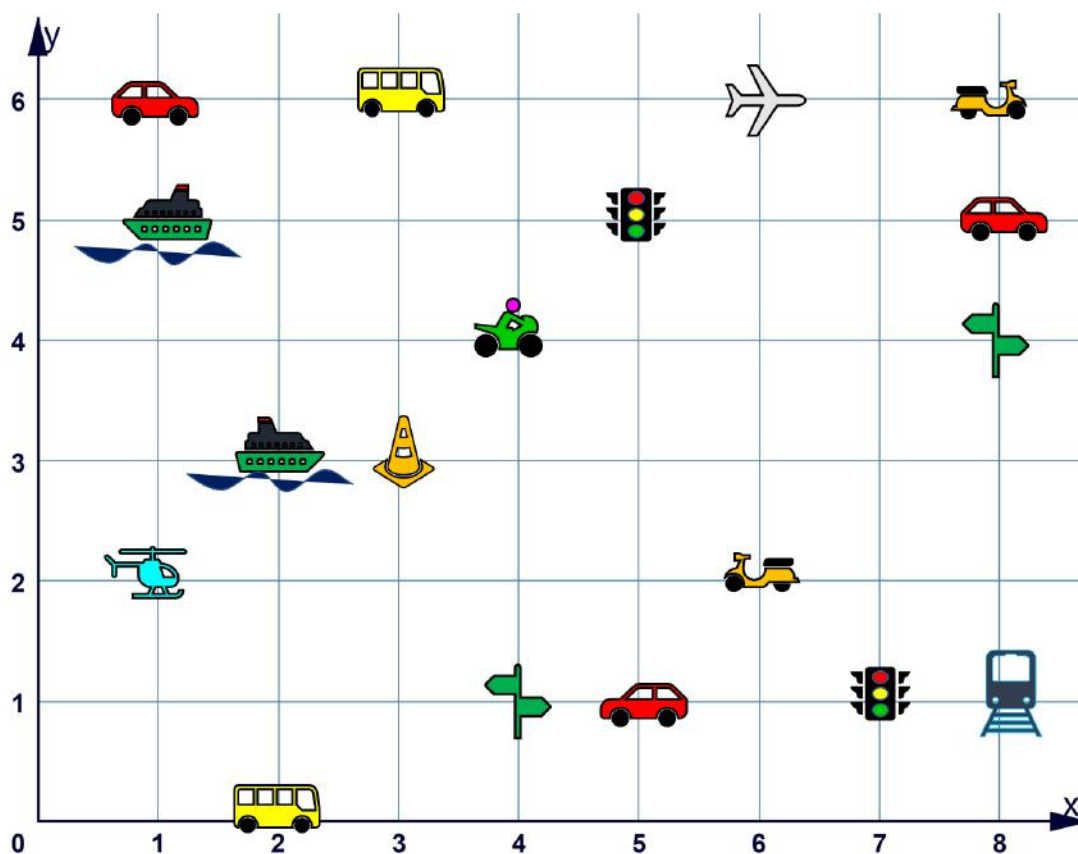
(6,2) (2,3) (8,5) (5,1) (4,4) (1,6)

Mystery message

Grade 4 Geometry Worksheet

Determine the mystery place: look up the coordinates and write down the letter for each vehicle.

= E	= R	= K	= A	= C	= G
= H	= L	= N	= I	= Z	= O



MYSTERY PLACE:

<u> H </u>	<u> E </u>	<u> R </u>	<u> A </u>	<u> K </u>	<u> L </u>	<u> I </u>	<u> O </u>	<u> N </u>
(3,3)	(1,6)	(1,5)	(1,2)	(3,6)	(8,1)	(5,5)	(6,6)	(4,1)
<u> G </u>	<u> R </u>	<u> E </u>	<u> E </u>	<u> C </u>	<u> E </u>			
(6,2)	(2,3)	(8,5)	(5,1)	(4,4)	(1,6)			