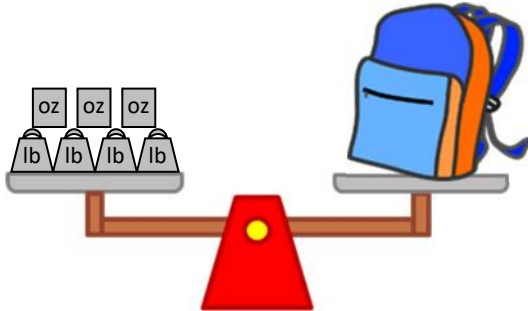


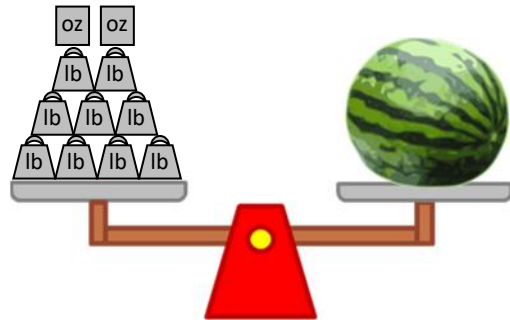
# Using a scale (pounds and ounces)

Grade 3 Measurement Worksheet

Fill in the blanks.



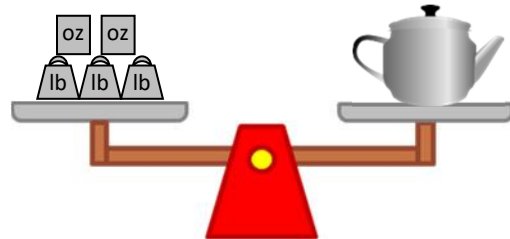
The school bag weighs  
 \_\_\_ lb \_\_\_ oz.



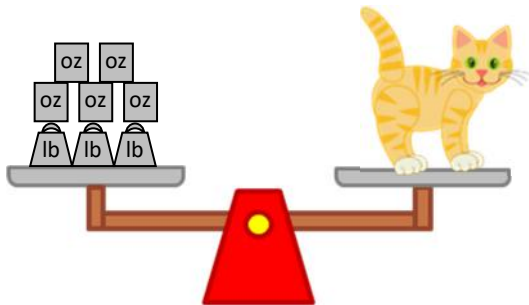
The watermelon weighs  
 \_\_\_ lb \_\_\_ oz.



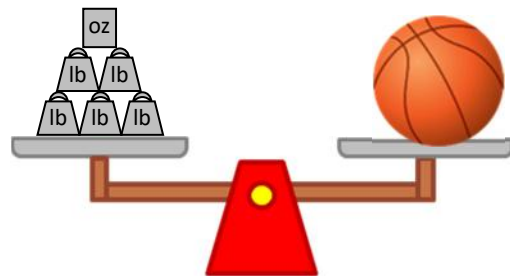
The flower pot weighs  
 \_\_\_ lb \_\_\_ oz.



The teapot weighs  
 \_\_\_ lb \_\_\_ oz.



The cat weighs  
 \_\_\_ lb \_\_\_ oz.



The basketball weighs  
 \_\_\_ lb \_\_\_ oz.

Which object is the heaviest? \_\_\_\_\_

Which object is the lightest? \_\_\_\_\_

## Answers

The school bag weighs 4 lb 3 oz.

The watermelon weighs 9 lb 2 oz.

The flower pot weighs 7 lb 2 oz.

The teapot weighs 3 lb 2 oz.

The cat weighs 3 lb 5 oz.

The basketball weighs 5 lb 1 oz.

Which object is the heaviest?

The watermelon is the heaviest.

Which object is the lightest?

The teapot is the lightest.