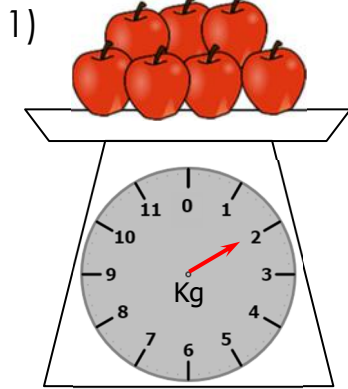



# Reading a scale (kilograms)

## Grade 3 Measurement Worksheet

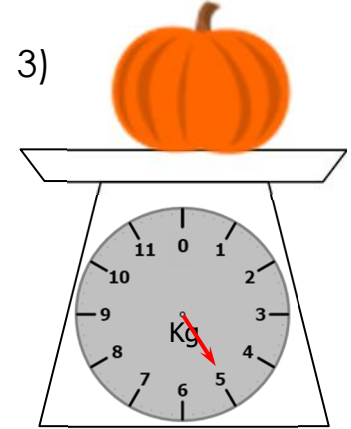
Find the weight of the following objects.



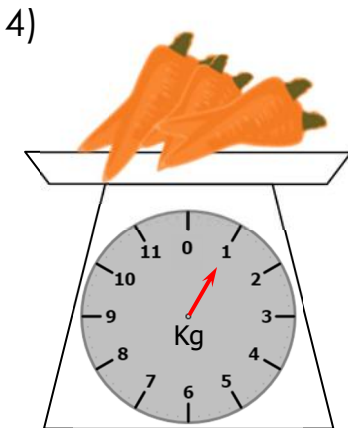
\_\_\_\_\_ kg



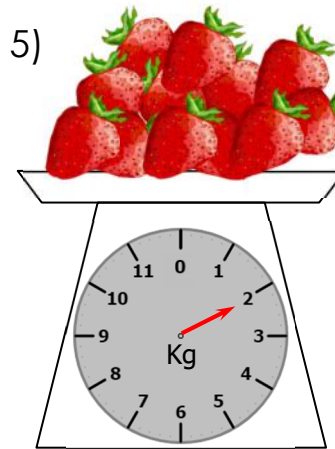
\_\_\_\_\_ kg



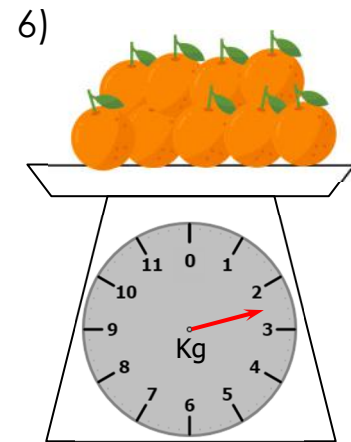
\_\_\_\_\_ kg



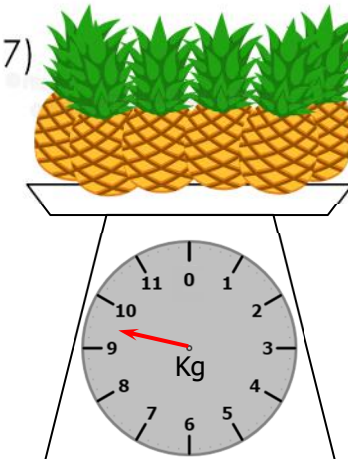
\_\_\_\_\_ kg



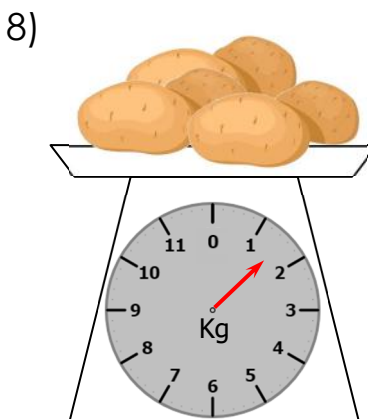
\_\_\_\_\_ kg



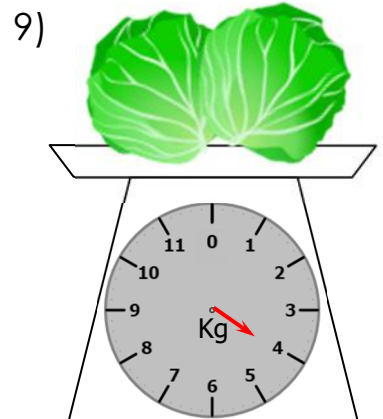
\_\_\_\_\_ kg



\_\_\_\_\_ kg



\_\_\_\_\_ kg



\_\_\_\_\_ kg

## Answers

- 1) 2 kg
- 2) 7 kg
- 3) 5 kg
- 4) 1 kg
- 5) 2 kg
- 6) 2.5 kg
- 7) 9.5 kg
- 8) 1.5 kg
- 9) 4 kg