





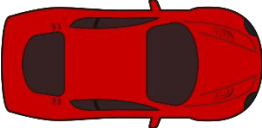
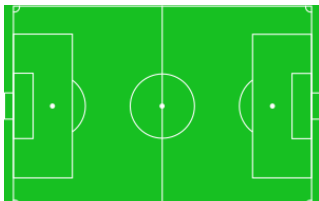



# Units of length: inches, feet, yards & miles

## Grade 3 Measurement Worksheet


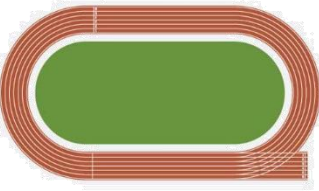




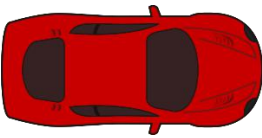
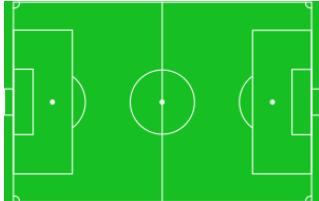

Circle the proper units.

<p>Length of a calendar</p> 	<p>Length of track</p> 	<p>Distance travelled by a plane</p> 
inches / feet / miles	inches / feet / yards	feet / yards / miles
<p>Width of a shirt</p> 	<p>Height of a man</p> 	<p>Length of a pair of scissors</p> 
inches / yards / miles	inches / feet / yards	inches / feet / miles
<p>Distance travelled by a car</p> 	<p>Length of a soccer field</p> 	<p>Height of a tree</p> 
inches / yards / miles	inches / yards / miles	inches / feet / yards

We measure short lengths (like pencils) in inches and longer lengths in feet or yards. or yards

We measure very long distances in miles.

## Answers

<p>Length of a calendar</p> 	<p>Length of track</p> 	<p>Distance travelled by a plane</p> 
inches / feet / miles	inches / feet / yards	feet / yards / miles
<p>Width of a shirt</p> 	<p>Height of a man</p> 	<p>Length of a pair of scissors</p> 
inches / yards / miles	inches / feet / yards	inches / feet / miles
<p>Distance travelled by a car</p> 	<p>Length of a soccer field</p> 	<p>Height of a tree</p> 
inches / yards / miles	inches / yards / miles	inches / feet / yards