


## Telling time - 5 minute intervals (draw the clock)

---

### Grade 3 Time Worksheet


Draw the time shown on each clock.

1.




9:05

2.




1:10

3.




6:10

4.




4:55

5.




11:10

6.




1:35

7.




5:00

8.



7:50

9.



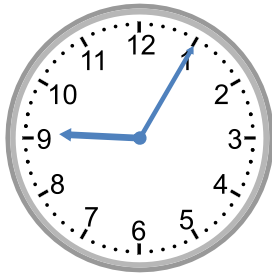
8:55

# Telling time - 5 minute intervals (draw the clock)

## Grade 3 Time Worksheet


Draw the time shown on each clock.

1.




9:05

2.




1:10

3.



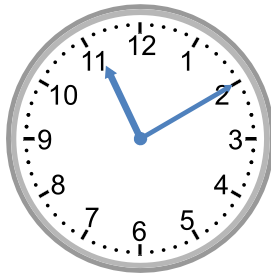
6:10

4.




4:55

5.




11:10

6.



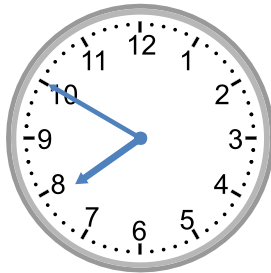
1:35

7.




5:00

8.



7:50

9.



8:55