


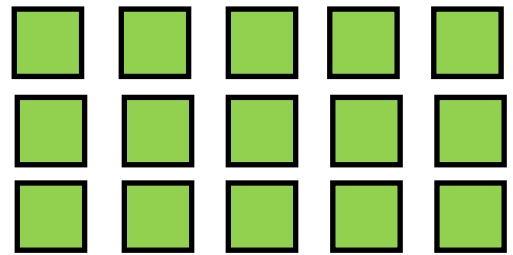
Multiplication sentences and arrays

Grade 3 Multiplication Worksheet


Write a multiplication equation to find the number of shapes.



$$\boxed{} \times \boxed{} = \boxed{}$$




$$\boxed{} \times \boxed{} = \boxed{}$$




$$\boxed{} \times \boxed{} = \boxed{}$$



$$\boxed{} \times \boxed{} = \boxed{}$$




$$\boxed{} \times \boxed{} = \boxed{}$$



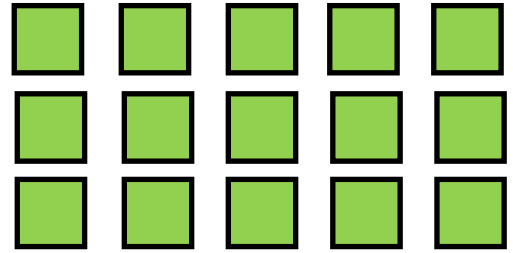
$$\boxed{} \times \boxed{} = \boxed{}$$

Answers




$$4 \times 3 = 12 \text{ or}$$

$$3 \times 4 = 12$$



$$3 \times 5 = 15 \text{ or}$$

$$5 \times 3 = 15$$




$$2 \times 4 = 8 \text{ or}$$

$$4 \times 2 = 8$$




$$4 \times 6 = 24 \text{ or}$$

$$6 \times 4 = 24$$



$$2 \times 3 = 6 \text{ or}$$

$$3 \times 2 = 6$$



$$4 \times 5 = 20 \text{ or}$$

$$5 \times 4 = 20$$