










# Metric units of weight: grams (g) and kilograms (kg)

## Grade 3 Measurement Worksheet

Fill in the proper unit (g or kg) for the weight of each object.

Hint: 1 kilogram = 1,000 grams

<p>A sundae: 250 _____</p> 	<p>A hammer: 2 _____</p> 	<p>A boy: 20 _____</p> 
<p>An alarm clock: 450 _____</p> 	<p>A paintbrush: 150 _____</p> 	<p>A picture frame: 1 _____</p> 
<p>A bread: 680 _____</p> 	<p>A laptop: 4 _____</p> 	<p>A wheel: 10 _____</p> 

Draw something that weighs 1 gram and 1 kilogram

<p>1 gram</p>	<p>1 kilogram</p>
---------------	-------------------

## Answers

A sundae: 250 g

A hammer: 2 kg

A boy: 20 kg

An alarm clock: 450 g

A paintbrush: 150 g

A picture frame: 1 kg

A bread: 680 g

A laptop: 4 kg

A wheel: 10 kg

Example of objects that weigh 1 gram:

a paper clip, a business card, a raisin, a thumbtack, a small safety pin

Example of objects that weigh 1 kilogram:

a bag of sugar, a bag of rice, a bunch of bananas, a pineapple, a small watermelon