










Units of weight: ounces and pounds

Grade 3 Measurement Worksheet

Fill in the proper unit (ounces or pounds) for the weight of each object.

Hint: 1 pound = 16 ounces

<p>A tape dispenser: 6 _____</p> 	<p>A bottle of soap: 2 _____</p> 	<p>A book: 8 _____</p> 
<p>A pair of scissors: 2 _____</p> 	<p>A glass pitcher: 2 _____</p> 	<p>A fridge: 25 _____</p> 
<p>A guitar: 5 _____</p> 	<p>A dumbbell: 6 _____</p> 	<p>A towel: 4 _____</p> 

Draw something that weighs 10 ounces and 10 pounds.

<div style="border: 1px solid black; height: 100px; width: 100%;"></div> <p>10 ounces</p>	<div style="border: 1px solid black; height: 100px; width: 100%;"></div> <p>10 pounds</p>
---	---

Answers

A tape dispenser: 6 ounces

A bottle of soap: 2 pounds

A book: 8 ounces

A pair of scissors: 2 ounces

A glass pitcher: 2 pounds

A fridge: 25 pounds

A guitar: 5 pounds

A dumbbell: 6 pounds

A towel: 4 ounces

Example of objects that weigh 10 ounces:

a hamster, a large orange, a burger, a soda can

Example of objects that weigh 10 pounds:

a bag of potatoes, a pumpkin, a bowling ball, a dog