










Estimate the volume of containers (liters)

Grade 3 Measurement Worksheet

Circle the best estimate of capacity of each container.

<p>A can of soup</p>  <p>Less than 1L / About 1L / More than 1L</p>	<p>A teapot</p>  <p>Less than 1L / About 1L / More than 1L</p>	<p>A backpack</p>  <p>Less than 1L / About 1L / More than 1L</p>
<p>A milk carton</p>  <p>Less than 1L / About 1L / More than 1L</p>	<p>A mug</p>  <p>Less than 1L / About 1L / More than 1L</p>	<p>A pitcher</p>  <p>Less than 1L / About 1L / More than 1L</p>
<p>Juice box</p>  <p>Less than 1L / About 1L / More than 1L</p>	<p>Fridge</p>  <p>Less than 1L / About 1L / More than 1L</p>	<p>Four glasses of juice</p>  <p>Less than 1L / About 1L / More than 1L</p>

Answers

<p>A can of soup</p>  <p>Less than 1L / About 1L / More than 1L</p>	<p>A teapot</p>  <p>Less than 1L / About 1L / More than 1L</p>	<p>A backpack</p>  <p>Less than 1L / About 1L / More than 1L</p>
<p>A milk carton</p>  <p>Less than 1L / About 1L / More than 1L</p>	<p>A mug</p>  <p>Less than 1L / About 1L / More than 1L</p>	<p>A pitcher</p>  <p>Less than 1L / About 1L / More than 1L</p>
<p>Juice box</p>  <p>Less than 1L / About 1L / More than 1L</p>	<p>Fridge</p>  <p>Less than 1L / About 1L / More than 1L</p>	<p>Four glasses of juice</p>  <p>Less than 1L / About 1L / More than 1L</p>