


# Meaning of multiplication sentences

## Grade 3 Multiplication Worksheet


Write the equation that describes how many objects there are.



$$\underline{\quad} \times \underline{\quad} = \underline{\quad}$$


How many cherries are there?

\_\_\_\_\_



$$\underline{\quad} \times \underline{\quad} = \underline{\quad}$$

How many spider legs are there? \_\_\_\_\_



$$\underline{\quad} \times \underline{\quad} = \underline{\quad}$$

How many penguins are there?


\_\_\_\_\_



$$\underline{\quad} \times \underline{\quad} = \underline{\quad}$$

How many flowers are there?

\_\_\_\_\_



$$\underline{\quad} \times \underline{\quad} = \underline{\quad}$$

How many balloons are there?

\_\_\_\_\_



$$\underline{\quad} \times \underline{\quad} = \underline{\quad}$$

How many candies are there?

\_\_\_\_\_


## Answers



$$9 \times 2 = 18$$


How many cherries are there?

18



$$4 \times 8 = 32$$

How many spider legs are there? 32



$$6 \times 3 = 18$$


How many penguins are there?

18



$$4 \times 7 = 28$$

How many flowers are there? 28



$$3 \times 5 = 15$$

How many balloons are there?

15



$$4 \times 4 = 16$$

How many candies are there?

16