


Meaning of division

Grade 3 Division Worksheet

Divide the food between the kids. Circle the correct equation.



$2 \times 7 =$

$2 + 14 =$

$14 \div 2 =$

$2 \div 14 =$

How many bananas does each kid get? _____




$4 \div 2 =$

$6 - 2 =$

$4 \times 2 =$

$8 \div 4 =$

How many muffins does each kid get? _____




$3 + 5 =$

$15 \div 3 =$

$15 - 3 =$

$8 \times 3 =$

How many pretzels does each kid get? _____



$3 \times 6 =$


$12 \div 3 =$

$12 \div 2 =$

$12 - 6 =$

How many cherries does each kid get? _____

Answers



$2 \times 7 =$

$2 + 14 =$

$14 \div 2 =$

$2 \div 14 =$

How many bananas does each kid get? **7**




$4 \div 2 =$

$6 - 2 =$

$4 \times 2 =$

$8 \div 4 =$

How many muffins does each kid get? **2**




$3 + 5 =$

$15 \div 3 =$

$15 - 3 =$

$8 \times 3 =$

How many pretzels does each kid get? **5**



$3 \times 6 =$

$12 \div 3 =$

$12 \div 2 =$

$12 - 6 =$

How many cherries does each kid get? **4**