



Identifying fractions - using blocks

Grade 3 Fractions Worksheet

Write the fraction.


1.  = _____

2.  = _____

3.  = _____


4.  = _____

5.  = _____


6.  = _____


7.  = _____

8.  = _____

9.  = _____


10.  = _____

11.  = _____

12.  = _____

13.  = _____

14.  = _____


15.  = _____

16.  = _____

17.  = _____

18.  = _____


19.  = _____

20.  = _____


Identifying fractions - using blocks


Grade 3 Fractions Worksheet

Write the fraction.

1.  = $\frac{2}{10}$ _____

2.  = $\frac{3}{5}$ _____

3.  = $\frac{5}{6}$ _____


4.  = $\frac{2}{5}$ _____

5.  = $\frac{1}{2}$ _____


6.  = $\frac{3}{10}$ _____


7.  = $\frac{2}{3}$ _____

8.  = $\frac{2}{4}$ _____

9.  = $\frac{3}{8}$ _____


10.  = $\frac{3}{4}$ _____

11.  = $\frac{1}{6}$ _____

12.  = $\frac{6}{8}$ _____

13.  = $\frac{4}{10}$ _____

14.  = $\frac{4}{5}$ _____


15.  = $\frac{7}{8}$ _____

16.  = $\frac{5}{10}$ _____

17.  = $\frac{1}{5}$ _____

18.  = $\frac{1}{3}$ _____

19.  = $\frac{1}{4}$ _____

20.  = $\frac{4}{6}$ _____